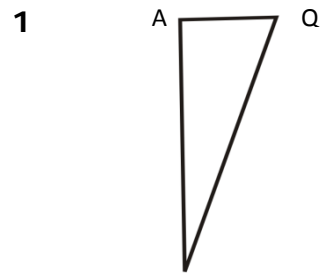


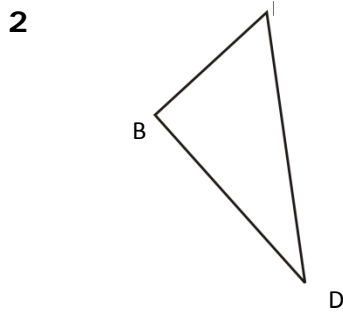
Name: _____

Date _____

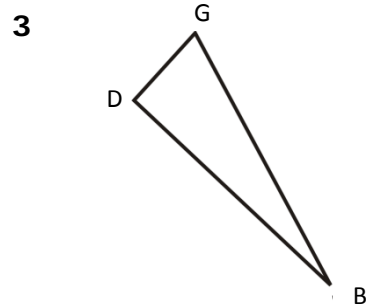
Topic: Find the cosine of one point- Worksheet 1



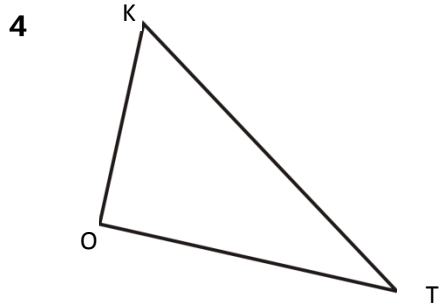
Find cos P.
AQ=4.2
AP=5.2
QP=1.2



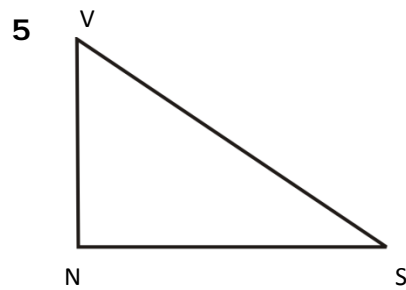
Find cos D.
BF=4.2
FD=3.2
DB=8.2



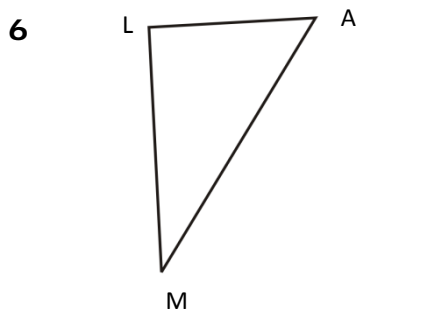
Find cos B.
DG=6.3
GB=2.7
DB=3



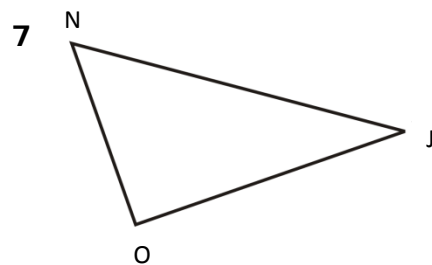
Find cos T.
KT=1.2
KO=3.2
OT=4



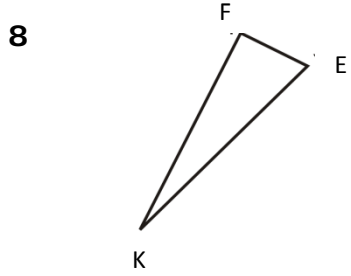
Find cos s.
VS=3.2
NS=2.2
VN=5.2



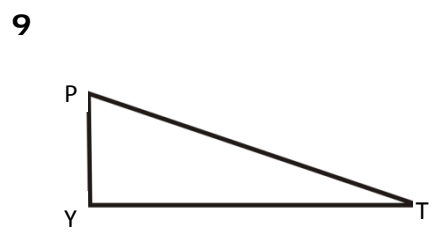
Find cos M.
LA=2.4
LM=2.6
MA=5.1



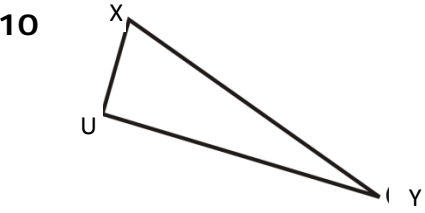
Find cos J.
OJ=6.7
JN=9.1
ON=3.4



Find cos K.
FE=2.2
FK=4.3
KE=6.2



Find cos T.
TY=8.3
YP=4.1
TP=3.6



Find cos Y.
UY=5.3
YX=6.2
UX=7.3




Name: _____

Date _____

findthesineofonepointTopic: Find the cosine of one point- Worksheet 3

1



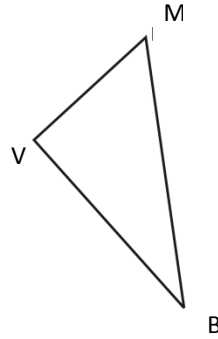
Find cos J.

$$AF=3.4$$

$$AJ=5.3$$

$$FJ=6.2$$

2



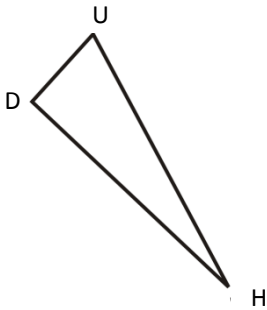
Find cos B.

$$VM=3.1$$

$$MB=7.2$$

$$BV=4.3$$

3



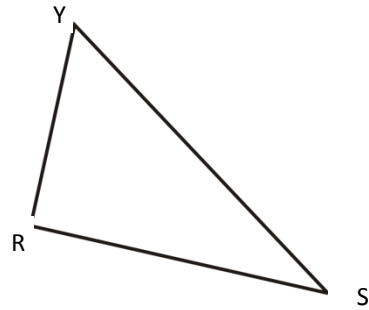
Find cos T.

$$DU=4.2$$

$$UH=1.7$$

$$DH=6.2$$

4



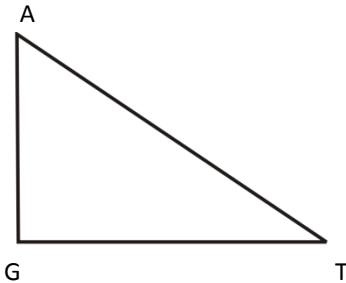
Find cos S.

$$YS=4.1$$

$$YR=2.6$$

$$RS=3.2$$

5



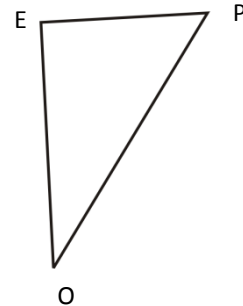
Find cos T.

$$AT=2.4$$

$$GT=3.1$$

$$AG=6.2$$

6



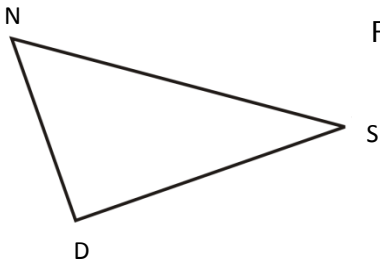
Find cos O.

$$EP=2.4$$

$$EO=1.3$$

$$OP=5.1$$

7



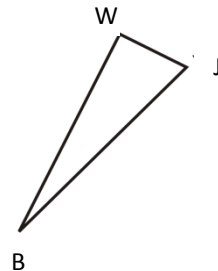
Find cos S.

$$DS=3.2$$

$$NS=1.4$$

$$ND=3.3$$

8



Find cos B.

$$WB=3.1$$

$$WJ=2.4$$

$$BJ=6.2$$

9



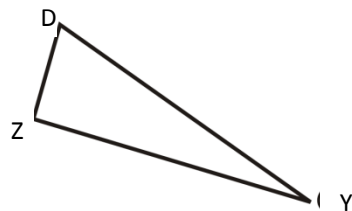
Find cos K.

$$KI=4.3$$

$$EI=3.6$$

$$KE=5.5$$

10



Find cos Y.

$$ZY=1.4$$

$$YD=5.2$$

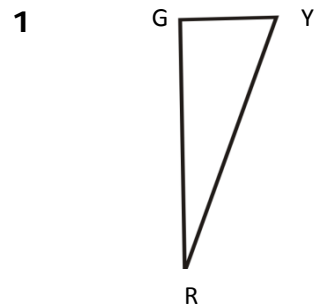
$$ZD=1.6$$



Name: _____

Date _____

Topic: Find the cosine of one point- Worksheet 4

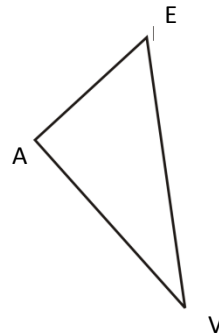


Find $\cos J$.

$$GY=2.1$$

$$GR=4.6$$

$$YR=8$$

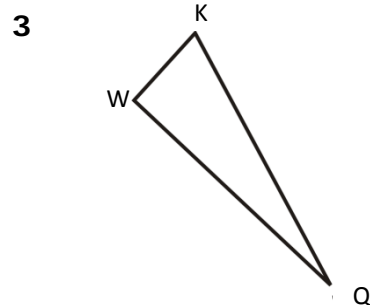


Find $\cos V$.

$$AE=2$$

$$EV=2.3$$

$$VA=1.1$$

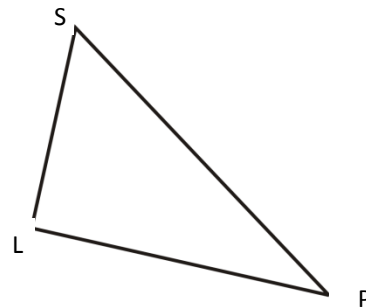


Find $\cos Q$.

$$WK=1.1$$

$$KQ=4$$

$$WQ=8.6$$

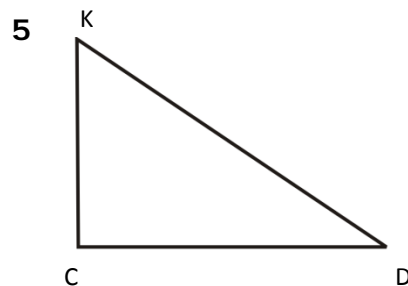


Find $\cos P$.

$$SP=2$$

$$SL=1.3$$

$$LP=2.2$$

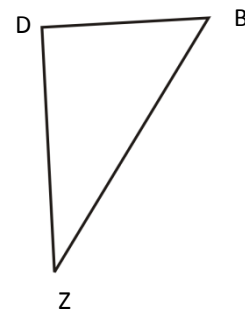


Find $\cos D$.

$$KD=1.1$$

$$CD=4.3$$

$$KC=3.1$$

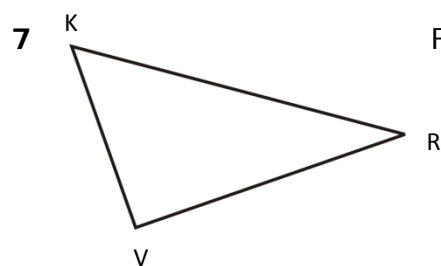


Find $\cos z$.

$$DB=6$$

$$DZ=2.1$$

$$ZB=4.3$$

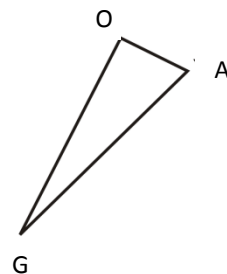


Find $\cos R$.

$$VR=8.2$$

$$KR=2$$

$$KV=1.1$$

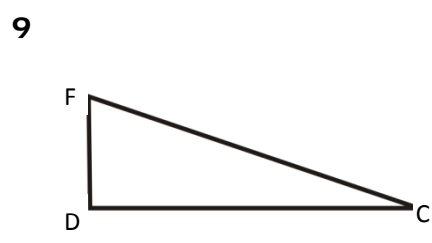


Find $\cos G$.

$$OA=1.6$$

$$OG=5.3$$

$$GA=3.6$$

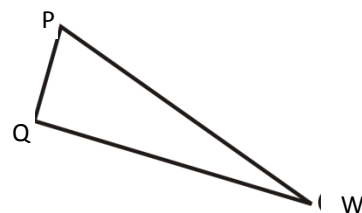


Find $\cos C$.

$$CD=8.4$$

$$FD=4$$

$$CF=6.1$$



Find $\cos W$.

$$QW=3.5$$

$$WP=1.6$$

$$QP=7.4$$




Name: _____

Date _____

Topic: Find the cosine of one point- Worksheet 5

1



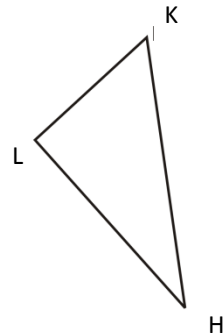
Find cos B.

$$XM=1.1$$

$$XB=3.4$$

$$MB=5.2$$

2



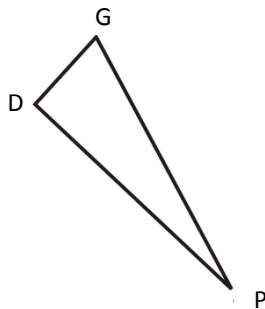
Find cos H.

$$LK=2$$

$$KH=6.1$$

$$HL=7.1$$

3



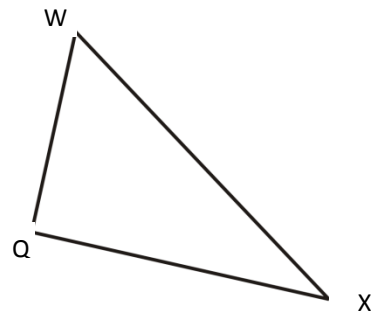
Find cos P.

$$DG=4.2$$

$$GP=2$$

$$DP=8.2$$

4



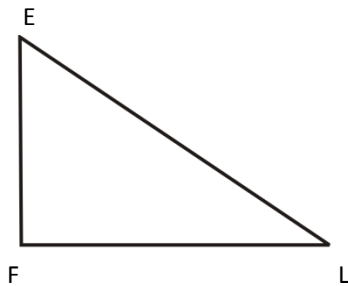
Find cos X.

$$WX=3.2$$

$$WQ=1.7$$

$$QX=8.3$$

5



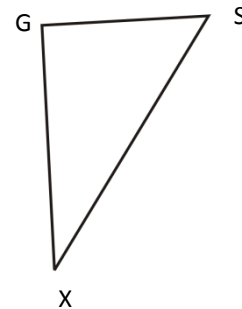
Find cos L.

$$EL=2.5$$

$$FL=6.3$$

$$EF=1.4$$

6



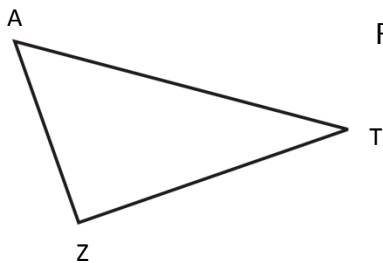
Find cos X.

$$GS=3.1$$

$$GX=8.6$$

$$XS=3$$

7



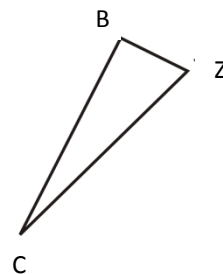
Find cos T.

$$ZT=6$$

$$AT=2.4$$

$$AZ=3.2$$

8



Find cos C.

$$BC=7.1$$

$$BZ=2.7$$

$$CZ=6$$

9



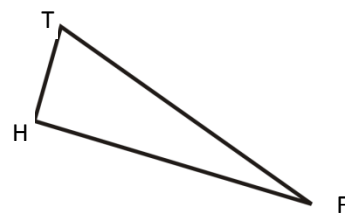
Find cos I.

$$IV=4.1$$

$$NV=8$$

$$NI=2.2$$

10



Find cos F.

$$HF=2.4$$

$$FT=6.2$$

$$HT=3$$

