

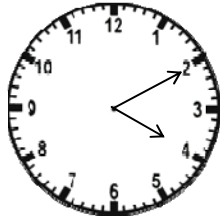
Name _____

Date _____


Minutes to - Matching Worksheet

Write the letter of the answer that matches the problem.

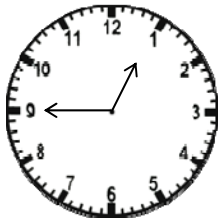
1. What time will it be in 6 hrs 10 min?




a.



2. What time was it 1 hr ago?




b.



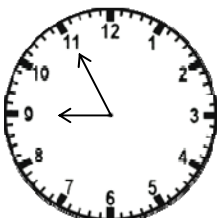
3. What time will it be in 2 hrs 40 min?



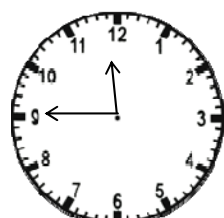
c.



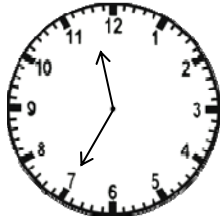
4. What time was it 5 hrs ago?



d.



5. What time will it be in 2 hrs 15 min?



e.

