


Name _____

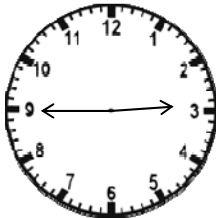
Date _____

Minutes to - Independent Practice Worksheet

Complete all the problems. Make sure to draw on the clocks that are provided to help you solve the problems.




1. What time was it 4 hr 10 min ago?



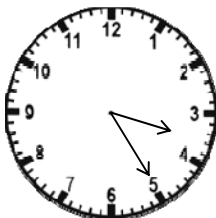
2. What time was it 1 hr 30 min ago?



3. What time was it 6 hr ago?



4. What time was it 3 hr 15 min ago?




5. What time was it 2 hr ago?

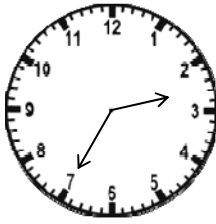


Name _____


Date _____



6. What time will it be in 15 min?



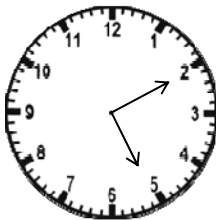
7. What time will it be in 3 hrs?



8. What time will it be in 10 hrs 20 min?



9. What time will it be in 1 hr 30 min?



10. What time will it be in 4 hrs?

