

Name \_\_\_\_\_

Date \_\_\_\_\_

### Telling Time - Hour Hand Practice Worksheet

Draw the hour hand as written against each clock face.



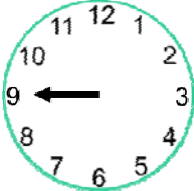




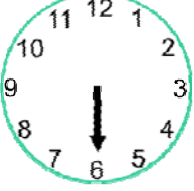

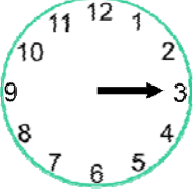
1		7 o'clock	2		1 o'clock
3		9 o'clock	4		5 o'clock
5		10 o'clock	6		2 o'clock
7		8 o'clock	8		6 o'clock
9		11 o'clock	10		3 o'clock



Name \_\_\_\_\_

Date \_\_\_\_\_

### Answer Key

1		7 o'clock	2		1 o'clock
3		9 o'clock	4		5 o'clock
5		10 o'clock	6		2 o'clock
7		8 o'clock	8		6 o'clock
9		11 o'clock	10		3 o'clock

