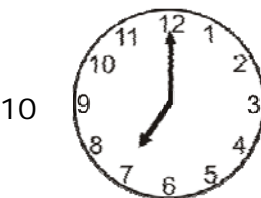





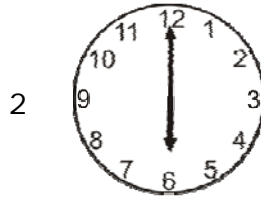
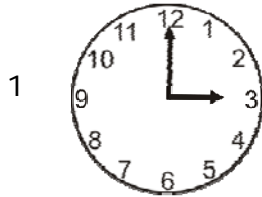


Name _____

Date _____

Telling Time - Whole Hour Practice Worksheet

Write the time using the expression o' clock.



Name _____

Date _____

Answer Key

1

3 o'clock

2

6 o'clock

3

8 o'clock

4

4 o'clock

5

9 o'clock

6

11 o'clock

7

5 o'clock

8

10 o'clock

9

2 o'clock

10

7 o'clock

