

Name _____

Date _____

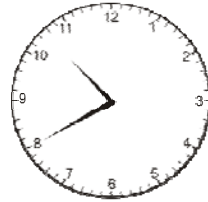
Telling Time – By 5 Minutes Practice Worksheet

What time is it? Answer using digits and a colon (for example, *11:58*).

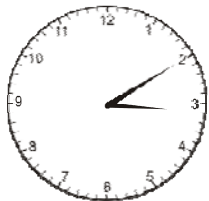
1



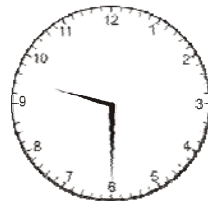
2



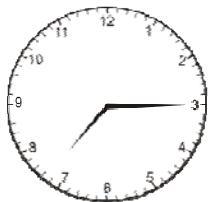
3



4



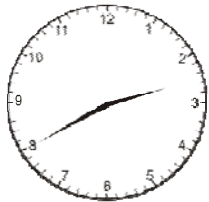
5



6



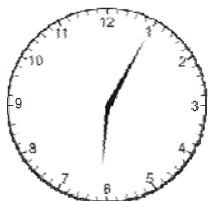
7



8



9



10



Name _____

Date _____

Answer Key

1 12:05 2 10:40 3 3:10 4 9:30 5 7:15
 6 11:25 7 2:40 8 10:00 9 6:05 10 5:10

