











Name \_\_\_\_\_

Date \_\_\_\_\_

## How Many Minutes Until... Practice Worksheet

How many minutes until the time that watch in each question shows?

1	It is 4:00 _____ minutes until It is 4:10 _____ minutes until It is 4:15 _____ minutes until It is 4:25 _____ minutes until	<b>4:30</b> 	2	It is 1:35 _____ minutes until It is 1:40 _____ minutes until It is 1:45 _____ minutes until It is 1:55 _____ minutes until	<b>2:00</b> 
3	It is 6:30 _____ minutes until It is 6:35 _____ minutes until It is 6:45 _____ minutes until It is 6:50 _____ minutes until	<b>7:05</b> 	4	It is 2:20 _____ minutes until It is 2:30 _____ minutes until It is 2:45 _____ minutes until It is 2:50 _____ minutes until	<b>3:00</b> 
5	It is 8:15 _____ minutes until It is 8:30 _____ minutes until It is 8:45 _____ minutes until It is 8:50 _____ minutes until	<b>9:00</b> 	6	It is 4:30 _____ minutes until It is 4:35 _____ minutes until It is 4:45 _____ minutes until It is 5:00 _____ minutes until	<b>5:15</b> 
7	It is 7:30 _____ minutes until It is 7:45 _____ minutes until It is 8:00 _____ minutes until It is 8:05 _____ minutes until	<b>8:10</b> 	8	It is 5:45 _____ minutes until It is 6:00 _____ minutes until It is 6:05 _____ minutes until It is 6:15 _____ minutes until	<b>6:20</b> 
9	It is 1:30 _____ minutes until It is 1:40 _____ minutes until It is 1:45 _____ minutes until It is 2:00 _____ minutes until	<b>2:05</b> 	10	It is 5:30 _____ minutes until It is 5:40 _____ minutes until It is 5:50 _____ minutes until It is 6:00 _____ minutes until	<b>6:05</b> 



Name \_\_\_\_\_

Date \_\_\_\_\_

### Answer Key

1	30 , 20 , 15 , 5	2	25 , 20 , 15 , 5
3	35 , 30 , 20 , 15	4	40 , 30 , 15 , 10
5	45 , 30 , 15 , 10	6	45 , 40 , 30 , 15
7	40 , 25 , 10 , 5	8	35 , 20 , 15 , 5
9	35 , 25 , 20 , 5	10	35 , 25 , 15 , 5

