

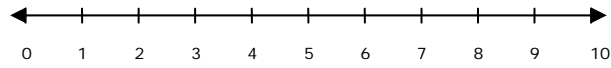
Name _____

Date _____

Number Line Subtraction - Matching Worksheet

Match the differences to the number lines.

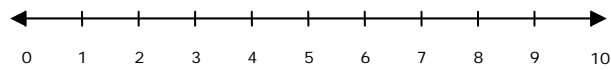
1.



a. 7

$$10 - 8 = \underline{\hspace{2cm}}$$

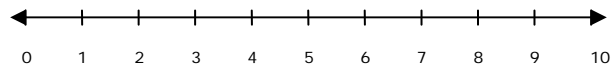
2.



b. 8

$$9 - 5 = \underline{\hspace{2cm}}$$

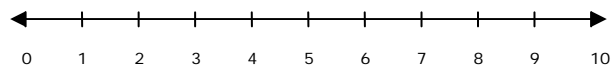
3.



c. 5

$$10 - 2 = \underline{\hspace{2cm}}$$

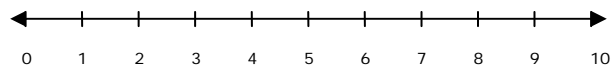
4.



d. 4

$$10 - 3 = \underline{\hspace{2cm}}$$

5.



e. 2

$$7 - 2 = \underline{\hspace{2cm}}$$

