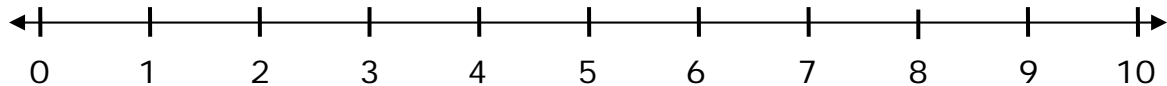


Name \_\_\_\_\_

Date \_\_\_\_\_

## Number Line Subtraction - Step-by-Step Lesson

Draw two arrows to display the difference between 9 and 3.

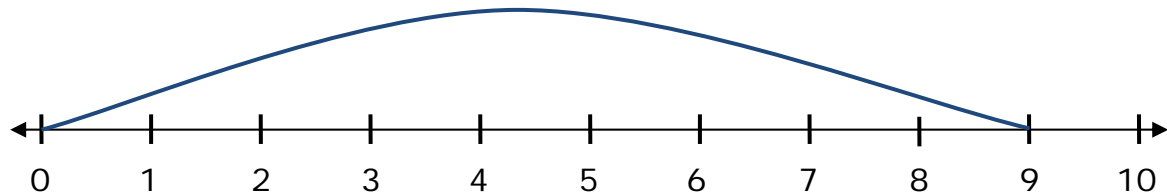


$$9 - 3 = \underline{\quad}$$

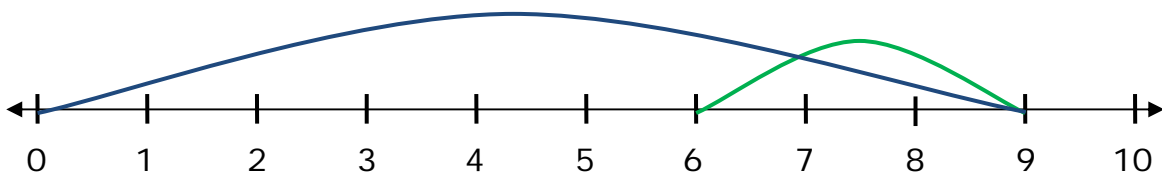
### Explanation:

The number given is 9. The first arrow is from number 0 to number 9 to display the gain in position from zero.

Subtract 3 from 9.



The second arrow is from number 6 to number 9.



So the answer is  $9 - 3 = 6$ .

