

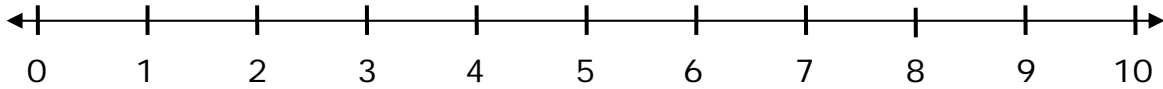
Name \_\_\_\_\_

Date \_\_\_\_\_

## Number Line Subtraction - Independent Practice Worksheet

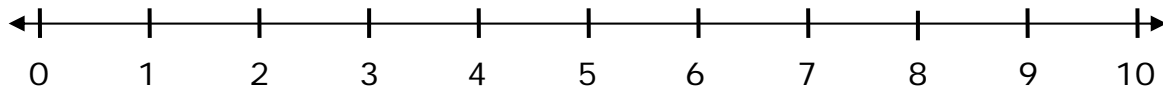
Solve the subtraction problems by drawing two lines to display the differences.

1.



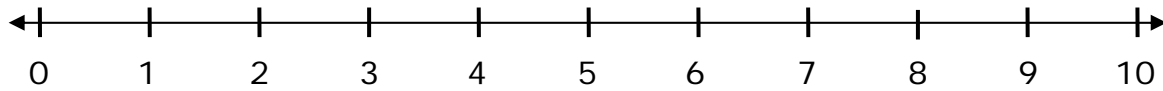
$$10 - 5 = \underline{\quad}$$

2.



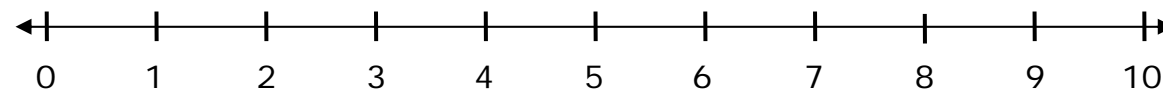
$$10 - 1 = \underline{\quad}$$

3.



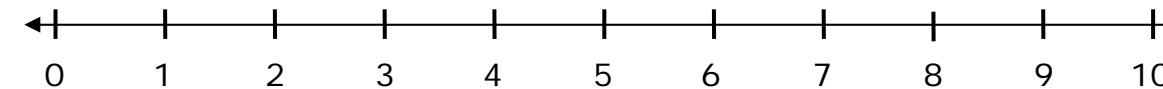
$$9 - 8 = \underline{\quad}$$

4.



$$10 - 3 = \underline{\quad}$$

5.



$$8 - 5 = \underline{\quad}$$

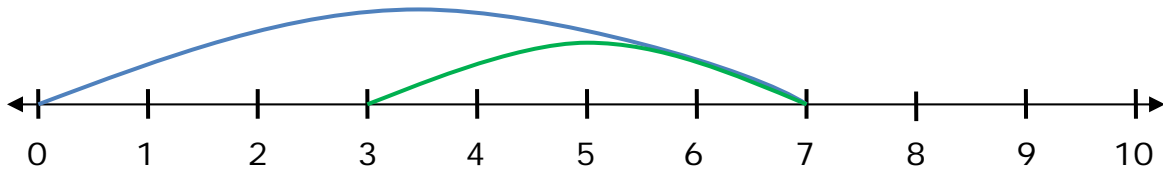


Name \_\_\_\_\_

Date \_\_\_\_\_

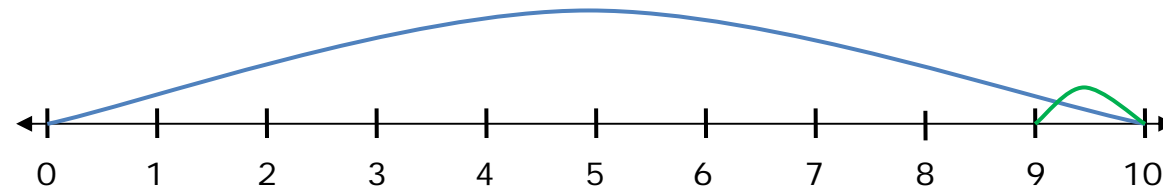
Solve the questions below by writing the problems displayed.

6.



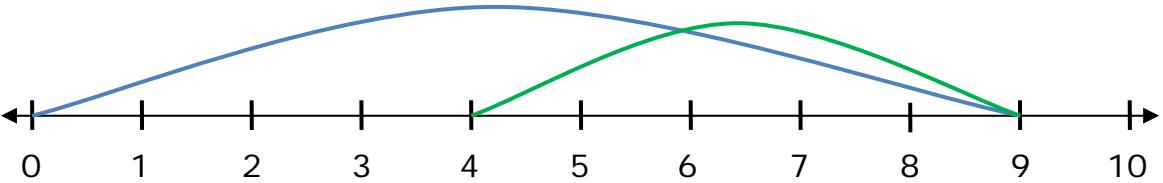
$$\underline{\quad} - \underline{\quad} = \underline{\quad}$$

7.



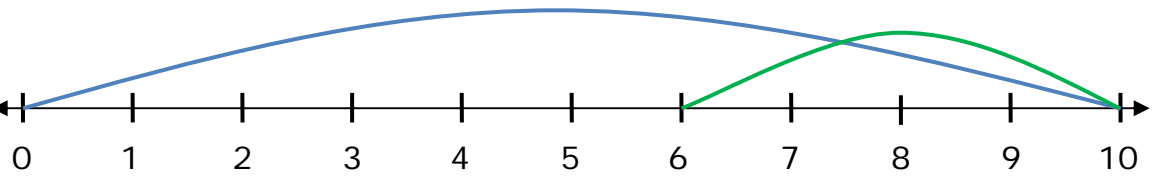
$$\underline{\quad} - \underline{\quad} = \underline{\quad}$$

8.



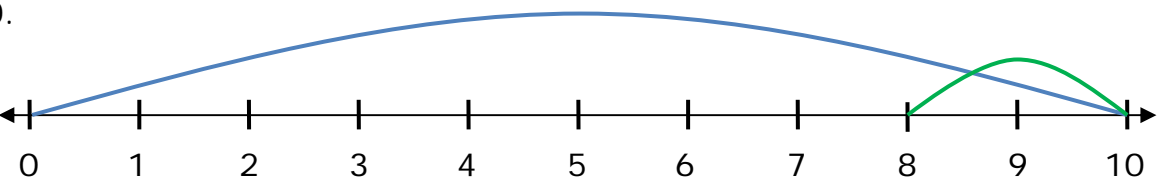
$$\underline{\quad} - \underline{\quad} = \underline{\quad}$$

9.



$$\underline{\quad} - \underline{\quad} = \underline{\quad}$$

10.



$$\underline{\quad} - \underline{\quad} = \underline{\quad}$$

