

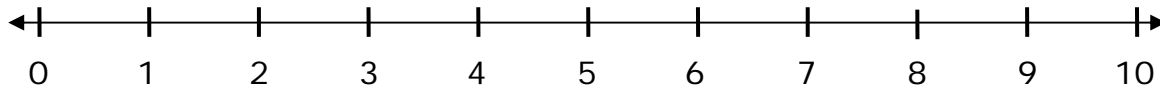
Name _____

Date _____

Number Line Subtraction - Guided Lesson

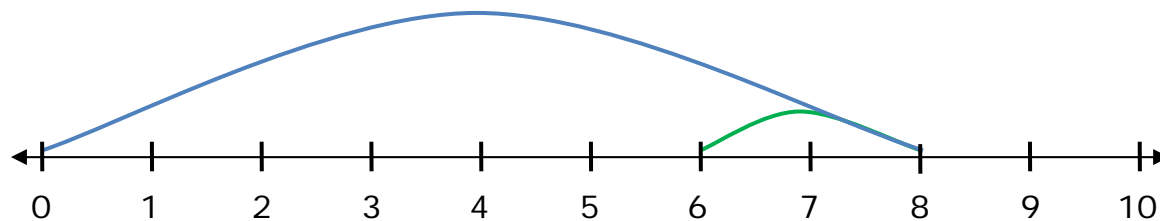
Complete the following problems:

1) Draw two arrows to display the difference below.



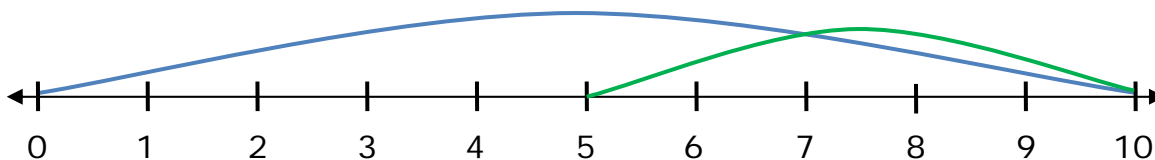
$$10 - 2 = \underline{\hspace{2cm}}$$

2) What difference does this number line display?



$$\underline{\hspace{1cm}} - \underline{\hspace{1cm}} = \underline{\hspace{1cm}}$$

3) What difference does this number line display?



$$\underline{\hspace{1cm}} - \underline{\hspace{1cm}} = \underline{\hspace{1cm}}$$

