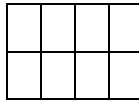



Subtraction with Dots Lesson



Subtract the following:


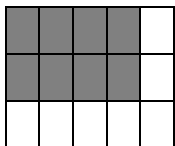
$$15 \quad - \quad 8 \quad = \quad \underline{\hspace{2cm}}$$



Explanation:

The figures make it easier to do these problems. We just need to remove the number of blocks on the right from the total number of blocks on the left.

$$15 \quad - \quad 8 \quad = \quad \underline{\hspace{2cm}}$$



Now count the remaining number of blocks.

				1
				2
7	6	5	4	3

So $15 - 8 = 7$

