

Name \_\_\_\_\_

Date \_\_\_\_\_

Topic: Number Line Subtraction- Worksheet 1

Use the number line to find the answer.

1.  $5 - 1$

2.  $6 - 4$

3.  $4 - 1$

4.  $5 - 4$

5.  $7 - 2$

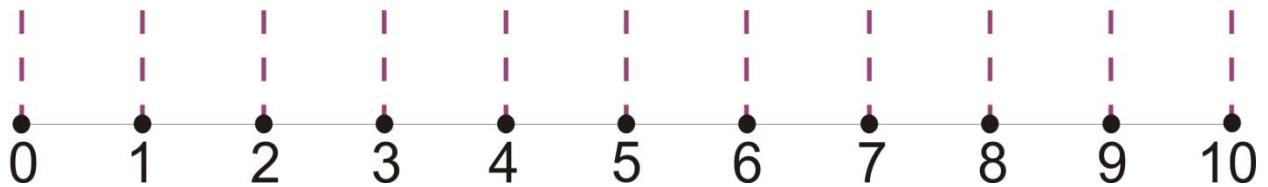
6.  $3 - 2$

7.  $8 - 8$

8.  $5 - 3$

9.  $9 - 6$

10.  $8 - 1$

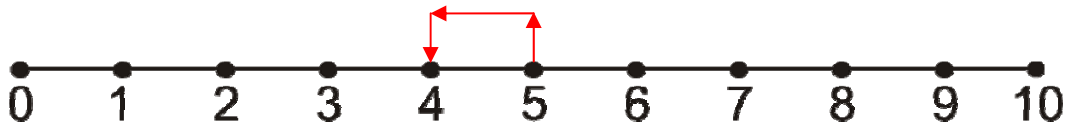
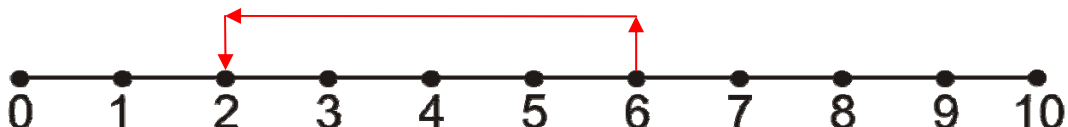

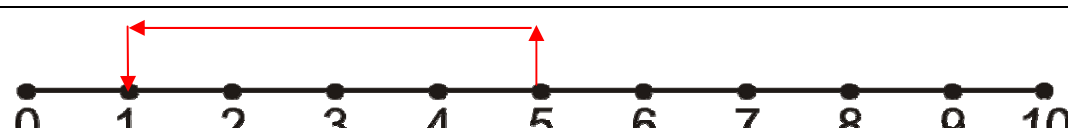
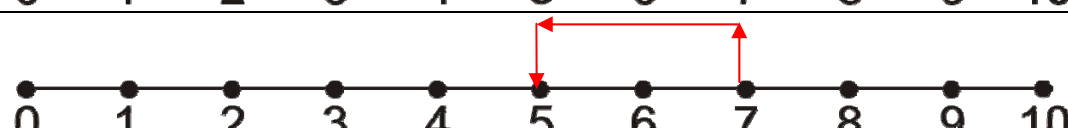
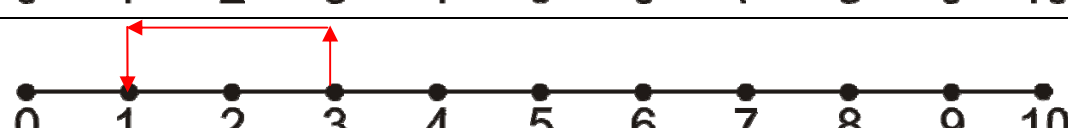
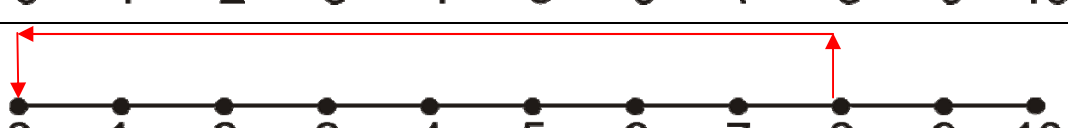
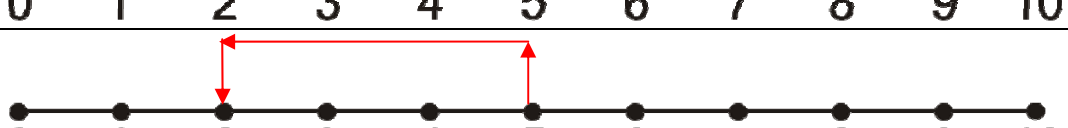
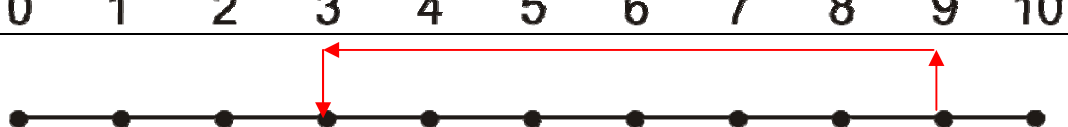



Name \_\_\_\_\_

Date \_\_\_\_\_

Topic: Number Line Subtraction- Worksheet 1 **ANSWERS**

Use the number line to find the answer.

1.	
2.	
3.	
4.	
5.	
6.	
7.	
8.	
9.	
10.	



Name \_\_\_\_\_

Date \_\_\_\_\_

Topic: Number Line Subtraction- Worksheet 2

Use the number line to find the answer.

1.  $6 - 2$

2.  $9 - 5$

3.  $3 - 1$

4.  $8 - 4$

5.  $8 - 2$

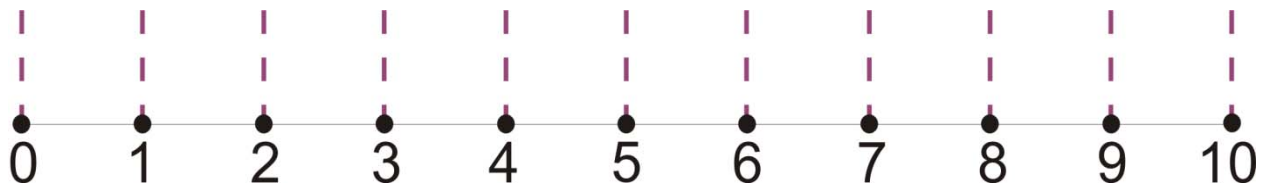
6.  $4 - 3$

7.  $9 - 8$

8.  $5 - 5$

9.  $9 - 5$

10.  $6 - 1$

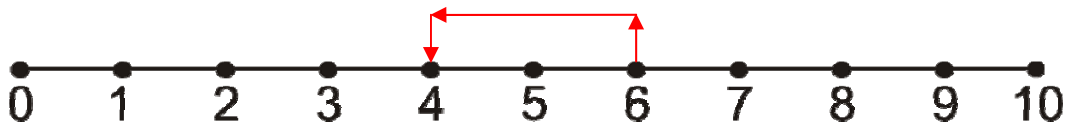
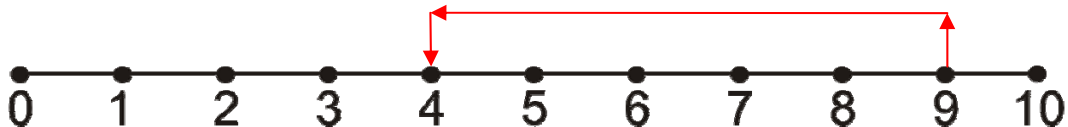
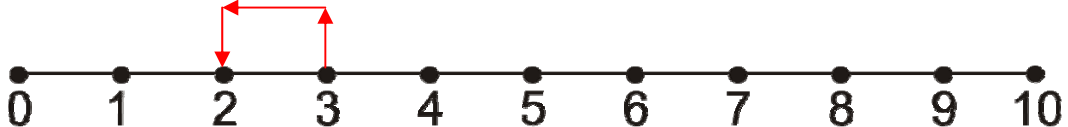
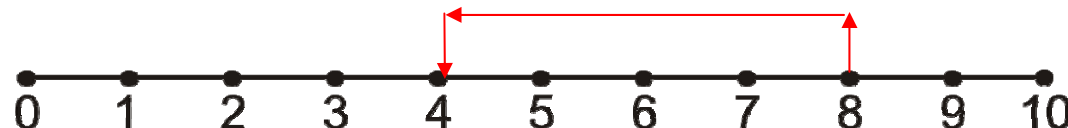
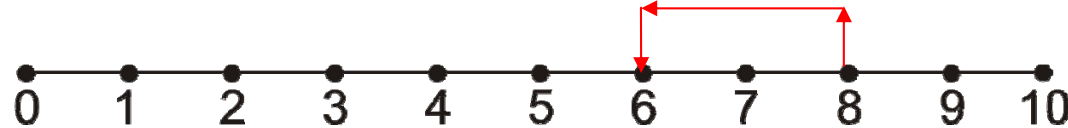
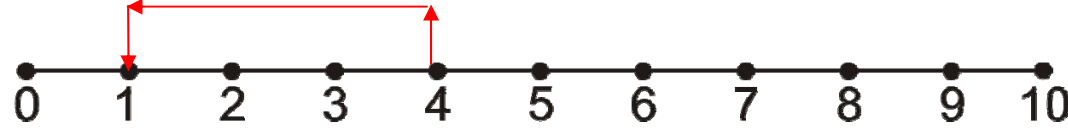

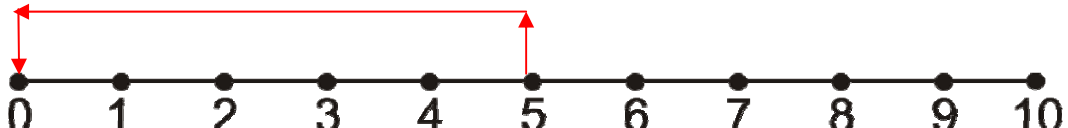

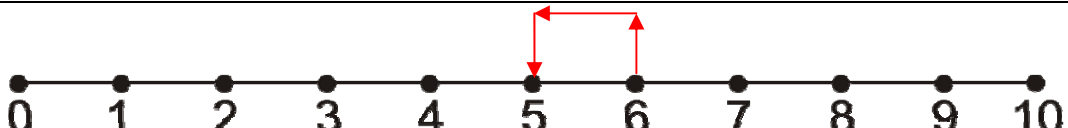


Name \_\_\_\_\_

Date \_\_\_\_\_

Topic: Number Line Subtraction- Worksheet 2 **ANSWERS**

Use the number line to find the answer.

1.	
2.	
3.	
4.	
5.	
6.	
7.	
8.	
9.	
10.	



Name \_\_\_\_\_

Date \_\_\_\_\_

Topic: Number Line Subtraction- Worksheet 3

Use the number line to find the answer.

1.  $7 - 5$

2.  $4 - 2$

3.  $5 - 3$

4.  $6 - 4$

5.  $3 - 2$

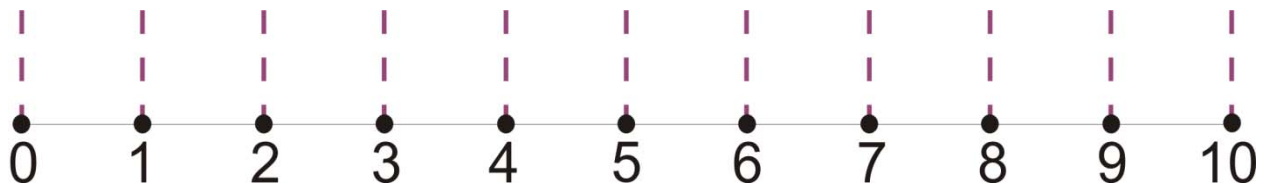
6.  $7 - 3$

7.  $10 - 8$

8.  $9 - 5$

9.  $2 - 1$

10.  $5 - 4$

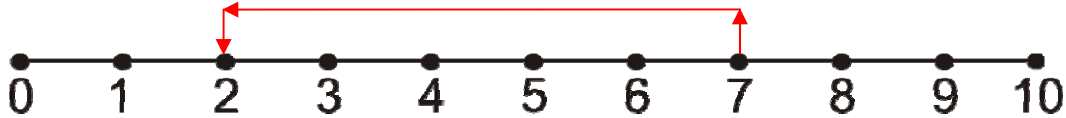

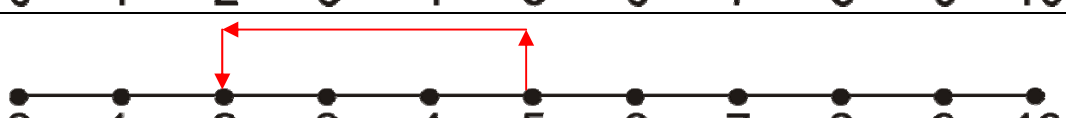


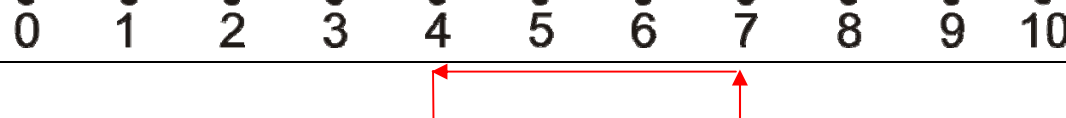
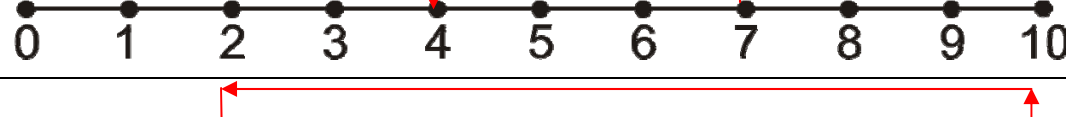
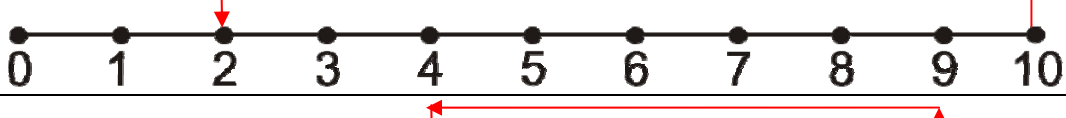
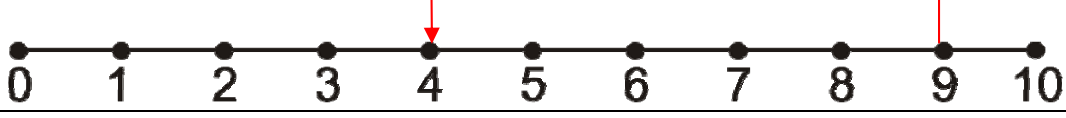



Name \_\_\_\_\_

Date \_\_\_\_\_

Topic: Number Line Subtraction- Worksheet 3 **ANSWERS**

Use the number line to find the answer.

1.	
2.	
3.	
4.	
5.	
6.	
7.	
8.	
9.	
10.	



Name \_\_\_\_\_

Date \_\_\_\_\_

Topic: Number Line Subtraction- Worksheet 4

Use the number line to find the answer.

1.  $8 - 5$

2.  $5 - 2$

3.  $9 - 3$

4.  $5 - 4$

5.  $8 - 2$

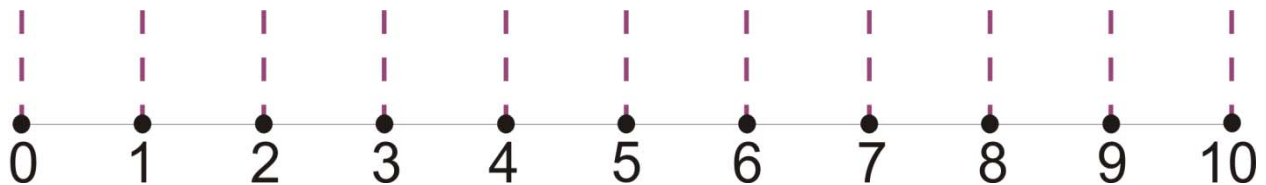
6.  $10 - 3$

7.  $9 - 8$

8.  $6 - 5$

9.  $4 - 1$

10.  $6 - 4$

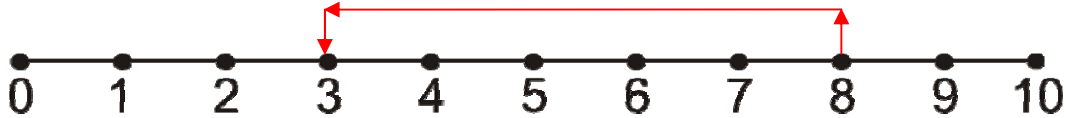
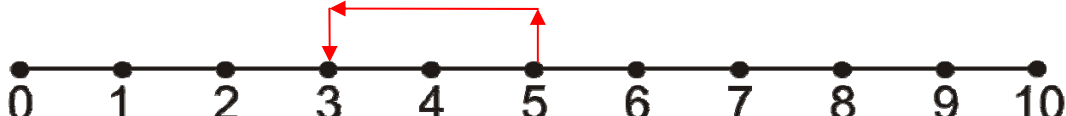



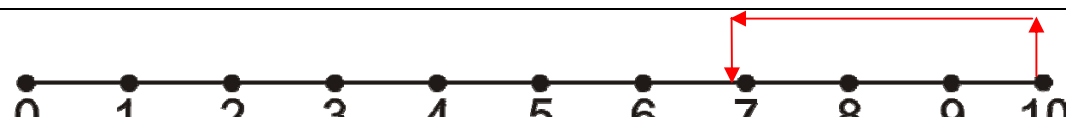
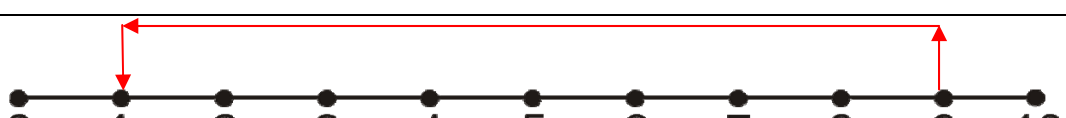
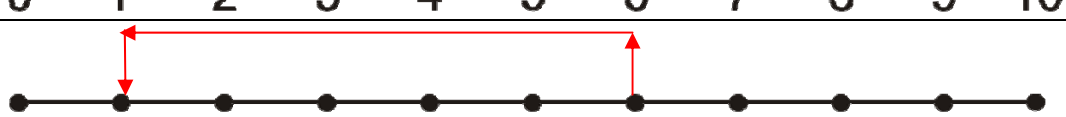

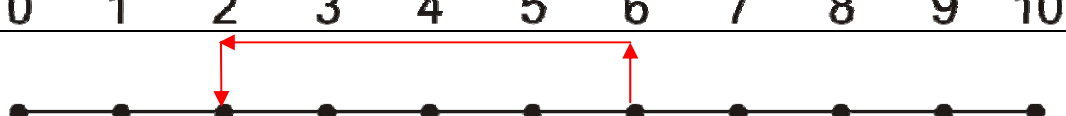


Name \_\_\_\_\_

Date \_\_\_\_\_

Topic: Number Line Subtraction- Worksheet 4 **ANSWERS**

Use the number line to find the answer.

1.	
2.	
3.	
4.	
5.	
6.	
7.	
8.	
9.	
10.	





Name \_\_\_\_\_

Date \_\_\_\_\_

Topic: Number Line Subtraction- Worksheet 5

Use the number line to find the answer.

1.  $6 - 5$

2.  $9 - 2$

3.  $7 - 3$

4.  $6 - 3$

5.  $8 - 8$

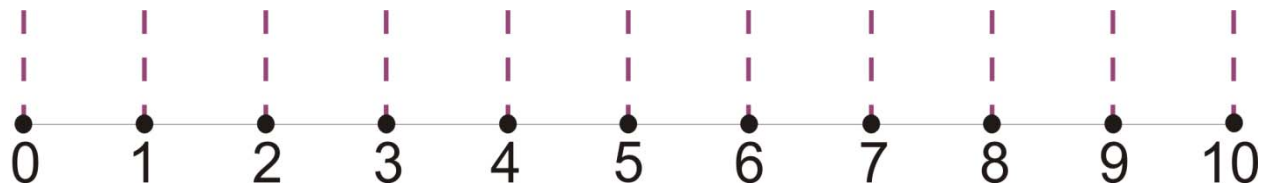
6.  $10 - 10$

7.  $8 - 7$

8.  $7 - 6$

9.  $6 - 1$

10.  $8 - 4$

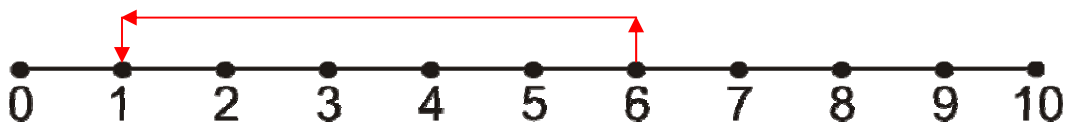
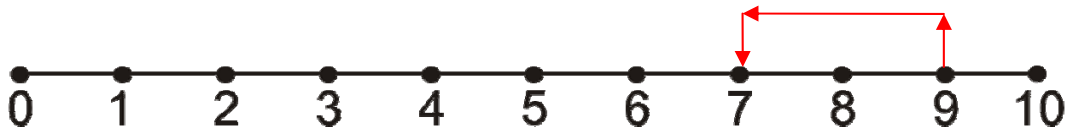
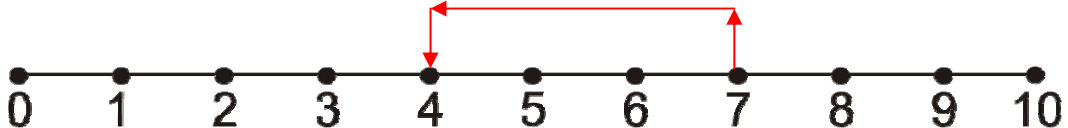
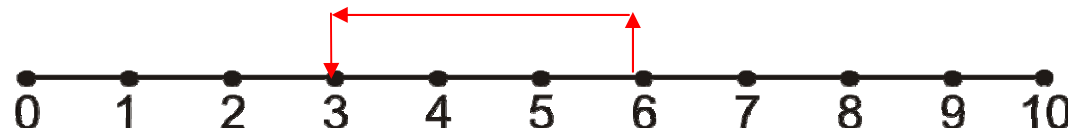
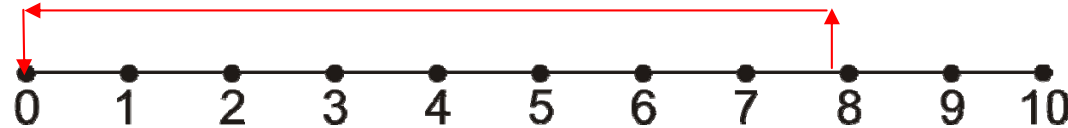
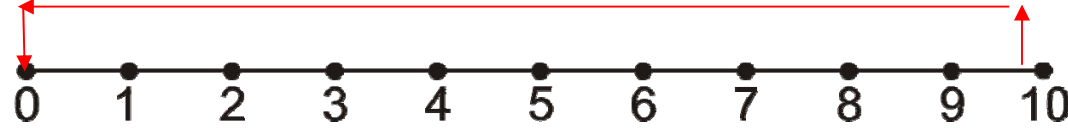


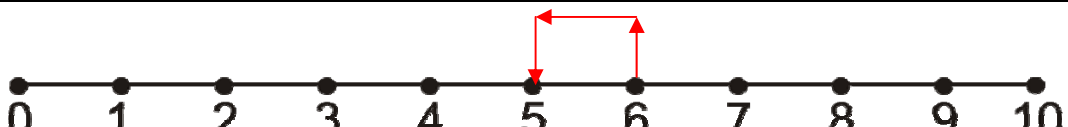


Name \_\_\_\_\_

Date \_\_\_\_\_

Topic: Number Line Subtraction- Worksheet 5 **ANSWERS**

Use the number line to find the answer.

1.	
2.	
3.	
4.	
5.	
6.	
7.	
8.	
9.	
10.	