

Name _____

Date _____

Single Digit Subtraction - Independent Practice Worksheet Answer Key

1. 1

2. 5

3. 2

4. 6

5. 4

6. 6

7. 3

8. 7

9. 0

10. 4



Name _____

Date _____

Single Digit Subtraction - Matching Worksheet Answer Key

1. h

2. i

3. g

4. a

5. c

6. d

7. e

8. b

9. f



Name _____

Date _____

Topic: Subtraction 0 to 9 - Worksheet 1 **ANSWERS**

$$\begin{array}{r} 1. \quad 8 \\ - 2 \\ \hline 6 \end{array}$$

$$\begin{array}{r} 2. \quad 5 \\ - 3 \\ \hline 2 \end{array}$$

$$\begin{array}{r} 3. \quad 6 \\ - 5 \\ \hline 1 \end{array}$$

$$\begin{array}{r} 4. \quad 9 \\ - 1 \\ \hline 8 \end{array}$$

$$\begin{array}{r} 5. \quad 5 \\ - 2 \\ \hline 3 \end{array}$$

$$\begin{array}{r} 6. \quad 8 \\ - 4 \\ \hline 4 \end{array}$$

$$\begin{array}{r} 7. \quad 5 \\ - 0 \\ \hline 5 \end{array}$$

$$\begin{array}{r} 8. \quad 7 \\ - 3 \\ \hline 4 \end{array}$$

$$\begin{array}{r} 9. \quad 2 \\ - 0 \\ \hline 2 \end{array}$$

$$\begin{array}{r} 10 \quad 4 \\ - 1 \\ \hline 3 \end{array}$$



Name _____

Date _____

Topic: Subtraction 0 to 9 - Worksheet 2 **ANSWERS**

$$\begin{array}{r} 1. \quad 9 \\ - 5 \\ \hline 4 \end{array}$$

$$\begin{array}{r} 2. \quad 4 \\ - 2 \\ \hline 2 \end{array}$$

$$\begin{array}{r} 3. \quad 4 \\ - 3 \\ \hline 1 \end{array}$$

$$\begin{array}{r} 4. \quad 7 \\ - 5 \\ \hline 2 \end{array}$$

$$\begin{array}{r} 5. \quad 6 \\ - 4 \\ \hline 2 \end{array}$$

$$\begin{array}{r} 6. \quad 9 \\ - 2 \\ \hline 7 \end{array}$$

$$\begin{array}{r} 7. \quad 4 \\ - 4 \\ \hline 0 \end{array}$$

$$\begin{array}{r} 8. \quad 3 \\ - 0 \\ \hline 3 \end{array}$$

$$\begin{array}{r} 9. \quad 9 \\ - 1 \\ \hline 8 \end{array}$$

$$\begin{array}{r} 10 \quad 5 \\ - 0 \\ \hline 5 \end{array}$$



Name _____

Date _____

Topic: Subtraction 0 to 9 - Worksheet 3 **ANSWERS**

$$\begin{array}{r} 1. \quad 6 \\ - 3 \\ \hline 3 \end{array}$$

$$\begin{array}{r} 2. \quad 9 \\ - 7 \\ \hline 2 \end{array}$$

$$\begin{array}{r} 3. \quad 5 \\ - 4 \\ \hline 1 \end{array}$$

$$\begin{array}{r} 4. \quad 8 \\ - 3 \\ \hline 5 \end{array}$$

$$\begin{array}{r} 5. \quad 5 \\ - 0 \\ \hline 5 \end{array}$$

$$\begin{array}{r} 6. \quad 7 \\ - 1 \\ \hline 6 \end{array}$$

$$\begin{array}{r} 7. \quad 5 \\ - 3 \\ \hline 2 \end{array}$$

$$\begin{array}{r} 8. \quad 4 \\ - 0 \\ \hline 4 \end{array}$$

$$\begin{array}{r} 9. \quad 7 \\ - 7 \\ \hline 0 \end{array}$$

$$\begin{array}{r} 10 \quad 6 \\ - 1 \\ \hline 5 \end{array}$$



Name _____

Date _____

Topic: Subtraction 0 to 9 - Worksheet 4 **ANSWERS**

$$\begin{array}{r} 1. \quad 2 \\ - 2 \\ \hline 0 \end{array}$$

$$\begin{array}{r} 2. \quad 5 \\ - 3 \\ \hline 2 \end{array}$$

$$\begin{array}{r} 3. \quad 9 \\ - 5 \\ \hline 4 \end{array}$$

$$\begin{array}{r} 4. \quad 7 \\ - 1 \\ \hline 6 \end{array}$$

$$\begin{array}{r} 5. \quad 8 \\ - 3 \\ \hline 5 \end{array}$$

$$\begin{array}{r} 6. \quad 7 \\ - 7 \\ \hline 0 \end{array}$$

$$\begin{array}{r} 7. \quad 9 \\ - 3 \\ \hline 6 \end{array}$$

$$\begin{array}{r} 8. \quad 6 \\ - 5 \\ \hline 1 \end{array}$$

$$\begin{array}{r} 9. \quad 5 \\ - 1 \\ \hline 4 \end{array}$$

$$\begin{array}{r} 10 \quad 7 \\ - 6 \\ \hline 1 \end{array}$$



Name _____

Date _____

Topic: Subtraction 0 to 9 - Worksheet 5 **ANSWERS**

$$\begin{array}{r} 1. \quad 5 \\ - 1 \\ \hline 4 \end{array}$$

$$\begin{array}{r} 2. \quad 8 \\ - 6 \\ \hline 2 \end{array}$$

$$\begin{array}{r} 3. \quad 7 \\ - 2 \\ \hline 5 \end{array}$$

$$\begin{array}{r} 4. \quad 5 \\ - 3 \\ \hline 2 \end{array}$$

$$\begin{array}{r} 5. \quad 6 \\ - 4 \\ \hline 2 \end{array}$$

$$\begin{array}{r} 6. \quad 9 \\ - 2 \\ \hline 7 \end{array}$$

$$\begin{array}{r} 7. \quad 5 \\ - 1 \\ \hline 4 \end{array}$$

$$\begin{array}{r} 8. \quad 9 \\ - 1 \\ \hline 8 \end{array}$$

$$\begin{array}{r} 9. \quad 9 \\ - 9 \\ \hline 0 \end{array}$$

$$\begin{array}{r} 10 \quad 5 \\ - 4 \\ \hline 1 \end{array}$$



Name _____

Date _____

Answer Key

1

-10

2

7



Name _____

Date _____

Answer Key

1

1

2

1

3

7

4

1

5

2

6

-2

7

-2

8

-5

9

-5

10

-8



Name _____

Date _____

Topic: Subtraction 0 to 9-Worksheet 1 **ANSWERS**

$$\begin{array}{r} 1. \quad 5 \\ - 4 \\ \hline 1 \end{array}$$

$$\begin{array}{r} 2. \quad 8 \\ - 2 \\ \hline 6 \end{array}$$

$$\begin{array}{r} 3. \quad 9 \\ - 3 \\ \hline 6 \end{array}$$

$$\begin{array}{r} 4. \quad 7 \\ - 5 \\ \hline 2 \end{array}$$

$$\begin{array}{r} 5. \quad 3 \\ - 2 \\ \hline 1 \end{array}$$

$$\begin{array}{r} 6. \quad 4 \\ - 2 \\ \hline 2 \end{array}$$

$$\begin{array}{r} 7. \quad 1 \\ - 0 \\ \hline 1 \end{array}$$

$$\begin{array}{r} 8. \quad 2 \\ - 1 \\ \hline 1 \end{array}$$

$$\begin{array}{r} 9. \quad 9 \\ - 7 \\ \hline 2 \end{array}$$

$$\begin{array}{r} 10 \quad 6 \\ - 5 \\ \hline 1 \end{array}$$



Name _____

Date _____

Topic: Single Digit Subtraction-Worksheet 2 **ANSWERS**

1.

$$\begin{array}{r} 1 \\ - 1 \\ \hline 0 \end{array}$$

2.

$$\begin{array}{r} 8 \\ - 7 \\ \hline 1 \end{array}$$

3.

$$\begin{array}{r} 3 \\ - 2 \\ \hline 1 \end{array}$$

4.

$$\begin{array}{r} 8 \\ - 6 \\ \hline 2 \end{array}$$

5.

$$\begin{array}{r} 6 \\ - 5 \\ \hline 1 \end{array}$$

6.

$$\begin{array}{r} 7 \\ - 4 \\ \hline 2 \end{array}$$

7.

$$\begin{array}{r} 2 \\ - 1 \\ \hline 1 \end{array}$$

8.

$$\begin{array}{r} 9 \\ - 8 \\ \hline 1 \end{array}$$

9.

$$\begin{array}{r} 5 \\ - 2 \\ \hline 3 \end{array}$$

10.

$$\begin{array}{r} 4 \\ - 3 \\ \hline 1 \end{array}$$



Name _____

Date _____

Topic: Single Digit Subtraction-Worksheet 3 **ANSWERS**

$$\begin{array}{r} 1. \quad 4 \\ - 3 \\ \hline 1 \end{array}$$

$$\begin{array}{r} 2. \quad 7 \\ - 7 \\ \hline 0 \end{array}$$

$$\begin{array}{r} 3. \quad 5 \\ - 3 \\ \hline 2 \end{array}$$

$$\begin{array}{r} 4. \quad 3 \\ - 2 \\ \hline 1 \end{array}$$

$$\begin{array}{r} 5. \quad 9 \\ - 6 \\ \hline 3 \end{array}$$

$$\begin{array}{r} 6. \quad 7 \\ - 2 \\ \hline 5 \end{array}$$

$$\begin{array}{r} 7. \quad 6 \\ - 1 \\ \hline 5 \end{array}$$

$$\begin{array}{r} 8. \quad 2 \\ - 2 \\ \hline 0 \end{array}$$

$$\begin{array}{r} 9. \quad 8 \\ - 3 \\ \hline 5 \end{array}$$

$$\begin{array}{r} 10. \quad 3 \\ - 0 \\ \hline 3 \end{array}$$



Name _____

Date _____

Topic: Single Digit Subtraction-Worksheet 4 **ANSWERS**

$$\begin{array}{r} 1. \quad 4 \\ - 1 \\ \hline 3 \end{array}$$

$$\begin{array}{r} 2. \quad 0 \\ - 0 \\ \hline 0 \end{array}$$

$$\begin{array}{r} 3. \quad 8 \\ - 5 \\ \hline 3 \end{array}$$

$$\begin{array}{r} 4. \quad 7 \\ - 4 \\ \hline 3 \end{array}$$

$$\begin{array}{r} 5. \quad 6 \\ - 3 \\ \hline 3 \end{array}$$

$$\begin{array}{r} 6. \quad 3 \\ - 1 \\ \hline 2 \end{array}$$

$$\begin{array}{r} 7. \quad 9 \\ - 7 \\ \hline 2 \end{array}$$

$$\begin{array}{r} 8. \quad 4 \\ - 2 \\ \hline 2 \end{array}$$

$$\begin{array}{r} 9. \quad 8 \\ - 4 \\ \hline 4 \end{array}$$

$$\begin{array}{r} 10 \quad 6 \\ - 5 \\ \hline 1 \end{array}$$



Name _____

Date _____

Topic: Single Digit Subtraction - Worksheet 5 **ANSWERS**

$$\begin{array}{r} 1. \quad 7 \\ - 6 \\ \hline 1 \end{array}$$

$$\begin{array}{r} 2. \quad 9 \\ - 2 \\ \hline 7 \end{array}$$

$$\begin{array}{r} 3. \quad 9 \\ - 6 \\ \hline 3 \end{array}$$

$$\begin{array}{r} 4. \quad 5 \\ - 4 \\ \hline 1 \end{array}$$

$$\begin{array}{r} 5. \quad 6 \\ - 3 \\ \hline 3 \end{array}$$

$$\begin{array}{r} 6. \quad 8 \\ - 5 \\ \hline 3 \end{array}$$

$$\begin{array}{r} 7. \quad 1 \\ - 0 \\ \hline 1 \end{array}$$

$$\begin{array}{r} 8. \quad 4 \\ - 3 \\ \hline 1 \end{array}$$

$$\begin{array}{r} 9. \quad 5 \\ - 2 \\ \hline 3 \end{array}$$

$$\begin{array}{r} 10 \quad 3 \\ - 1 \\ \hline 2 \end{array}$$

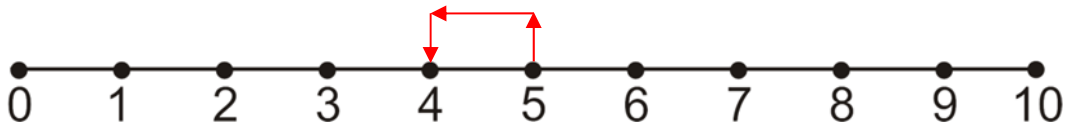
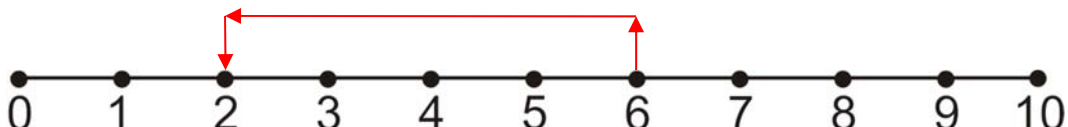
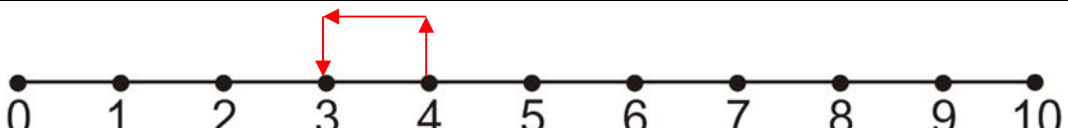
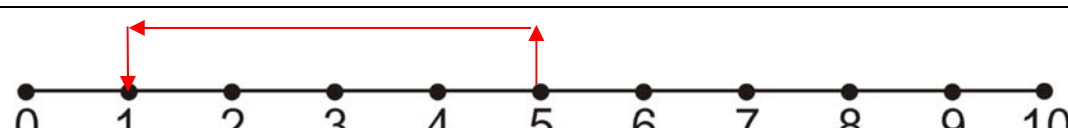
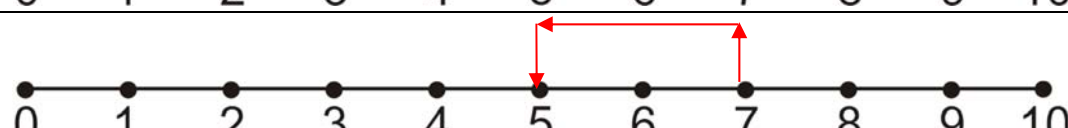
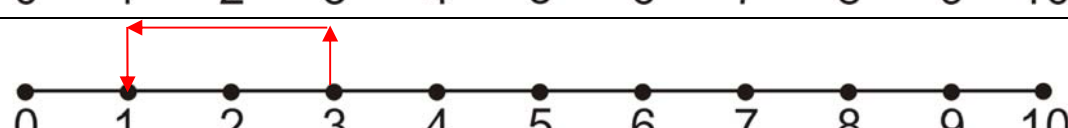
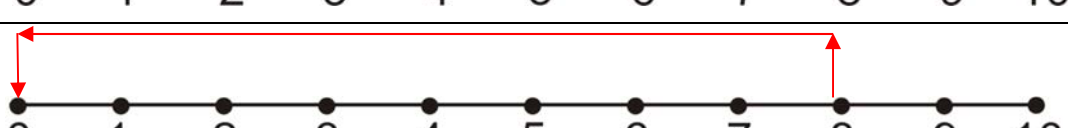
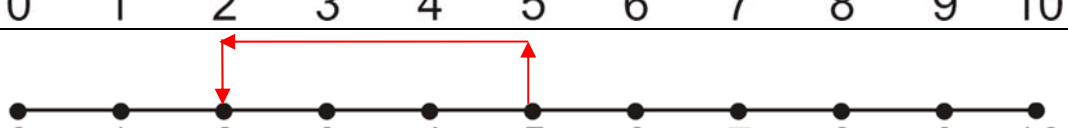
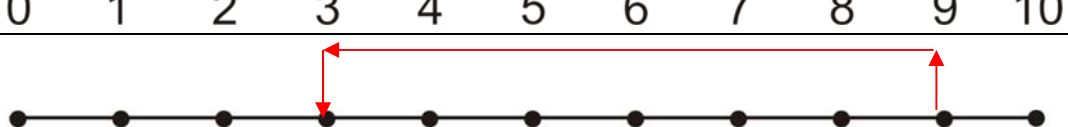



Name _____

Date _____

Topic: Number Line Subtraction- Worksheet 1 **ANSWERS**

Use the number line to find the answer.

1.	
2.	
3.	
4.	
5.	
6.	
7.	
8.	
9.	
10.	

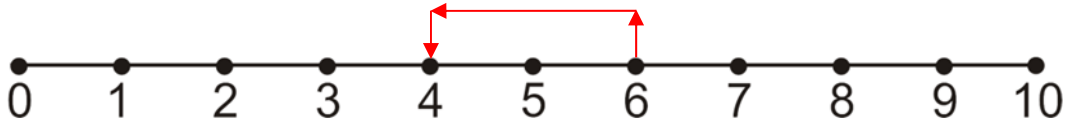
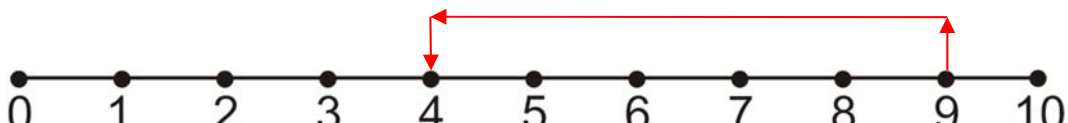

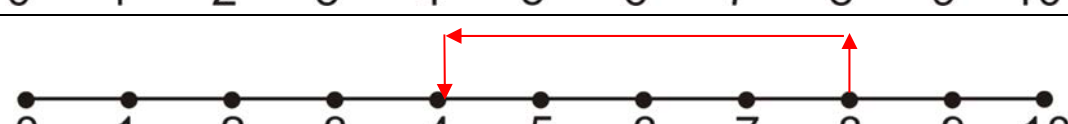
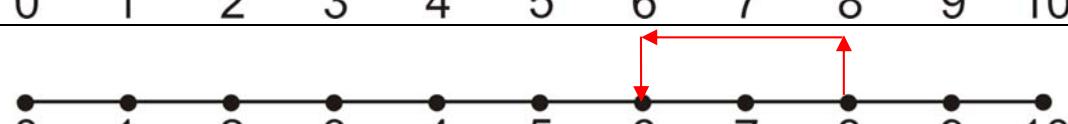
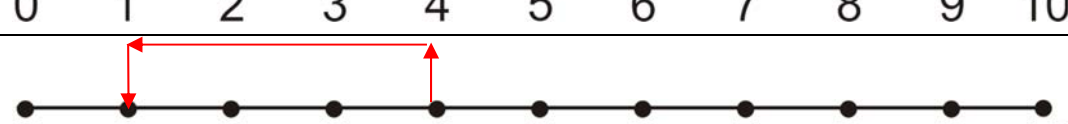
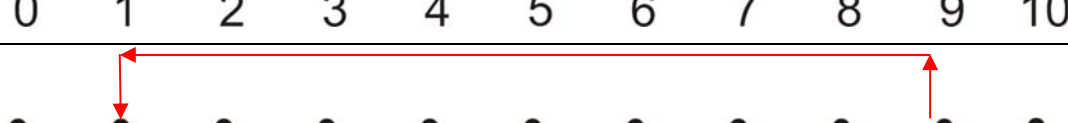
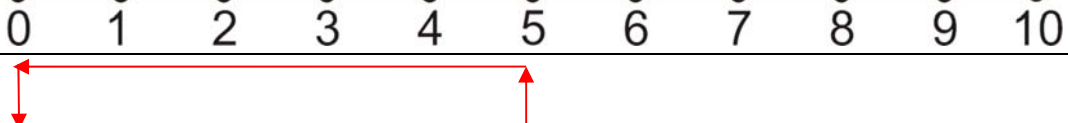
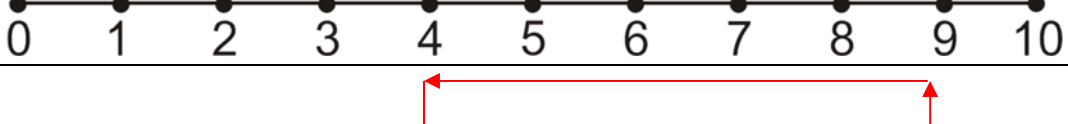
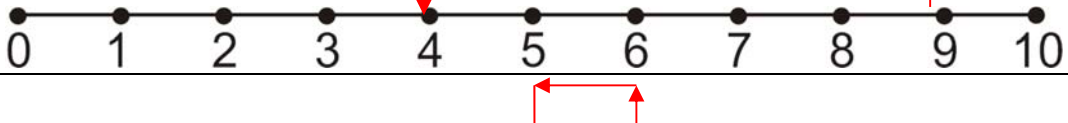


Name _____

Date _____

Topic: Number Line Subtraction- Worksheet 2 **ANSWERS**

Use the number line to find the answer.

1.	
2.	
3.	
4.	
5.	
6.	
7.	
8.	
9.	
10.	

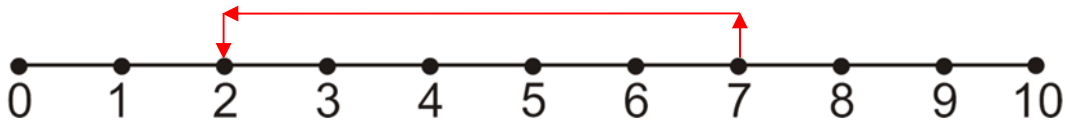
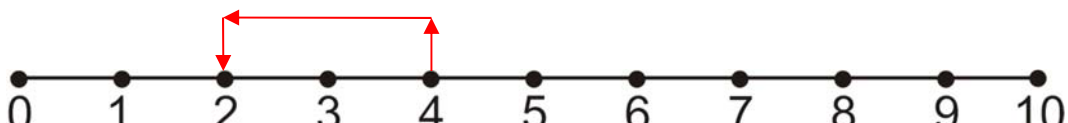
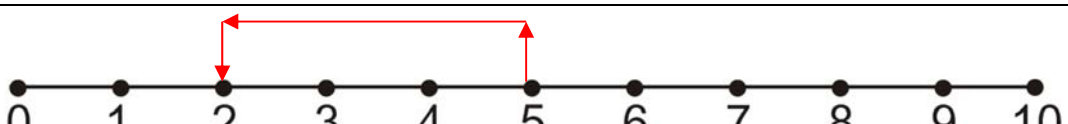
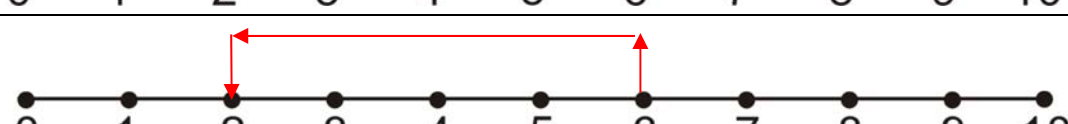
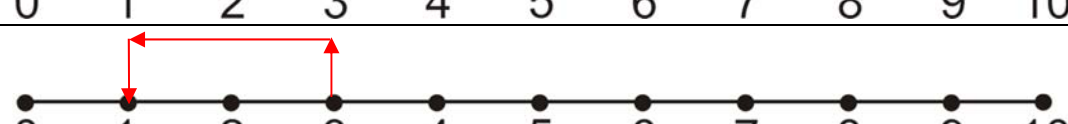
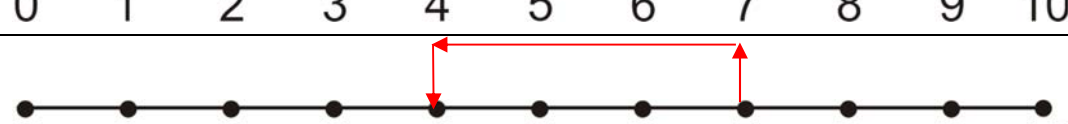
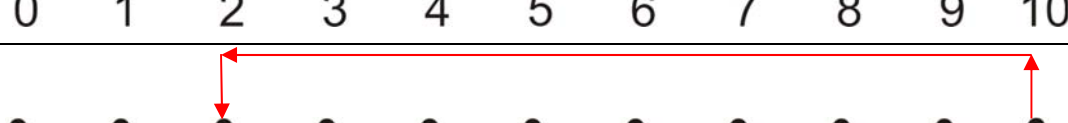
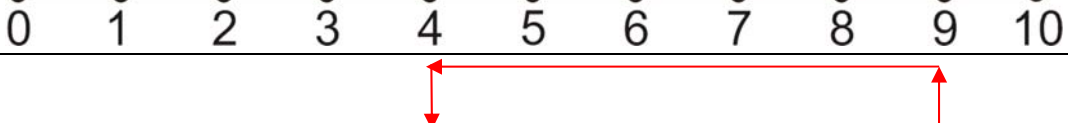
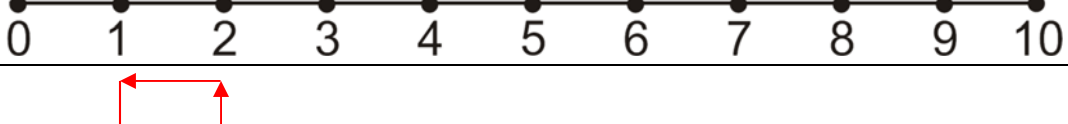
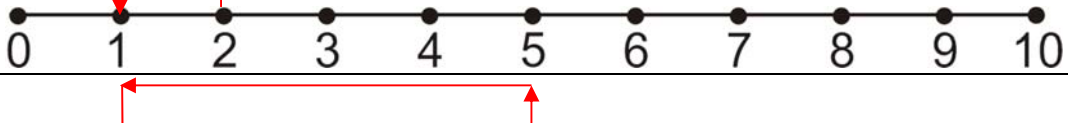


Name _____

Date _____

Topic: Number Line Subtraction- Worksheet 3 **ANSWERS**

Use the number line to find the answer.

1.	
2.	
3.	
4.	
5.	
6.	
7.	
8.	
9.	
10.	

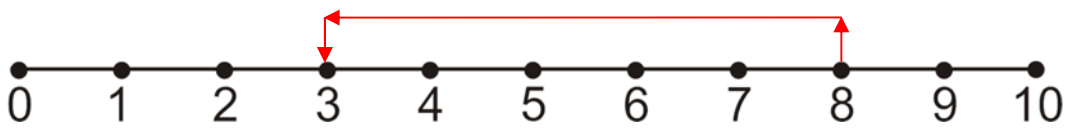
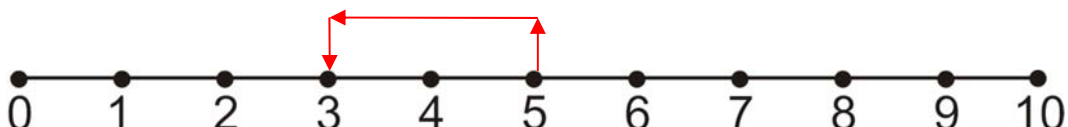
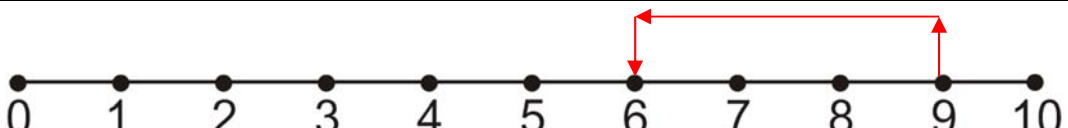
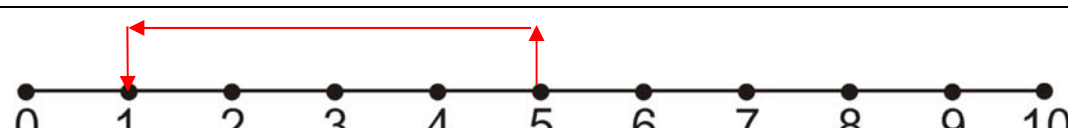
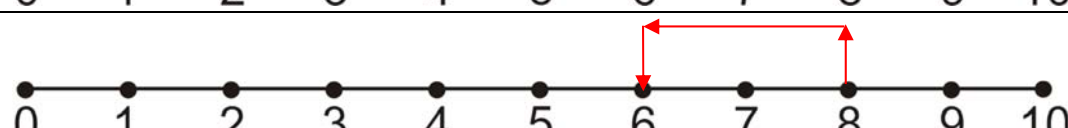
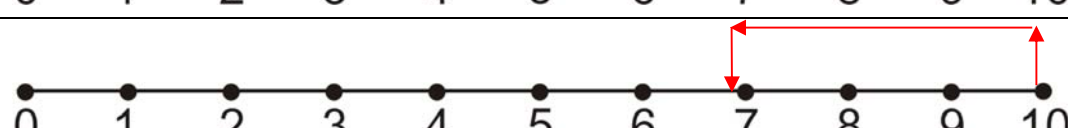
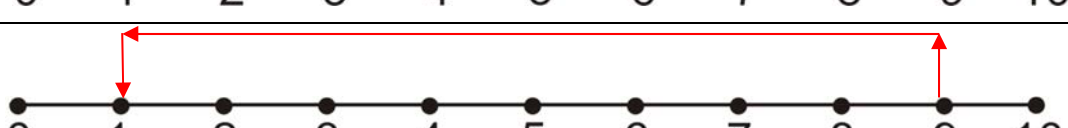
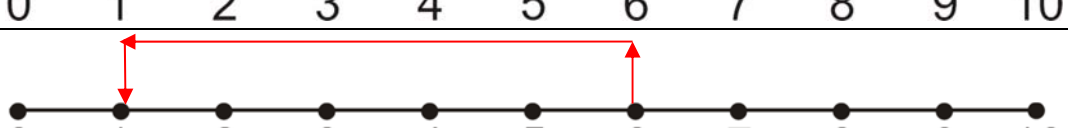
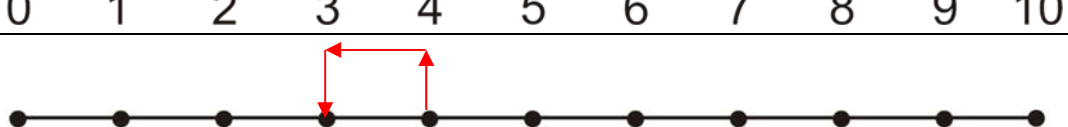
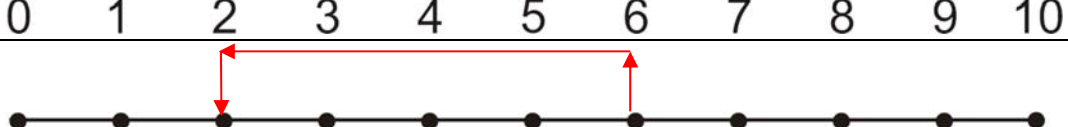


Name _____

Date _____

Topic: Number Line Subtraction- Worksheet 4 **ANSWERS**

Use the number line to find the answer.

1.	
2.	
3.	
4.	
5.	
6.	
7.	
8.	
9.	
10.	

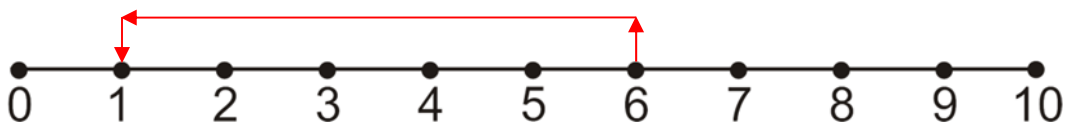
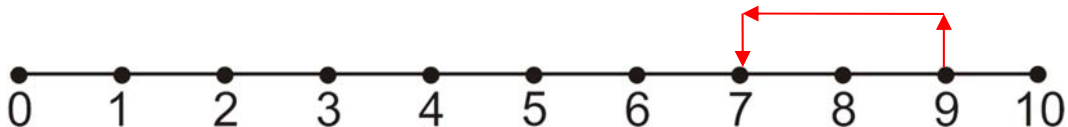
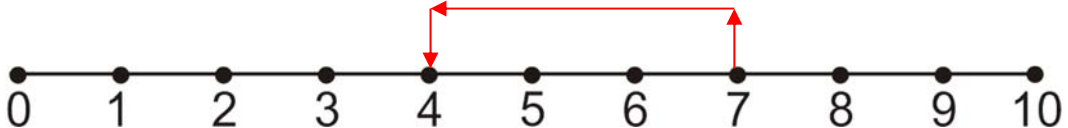
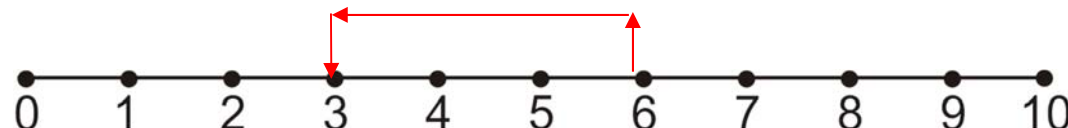
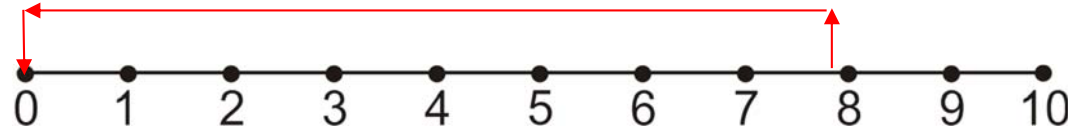
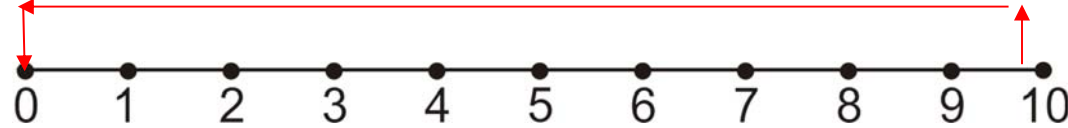
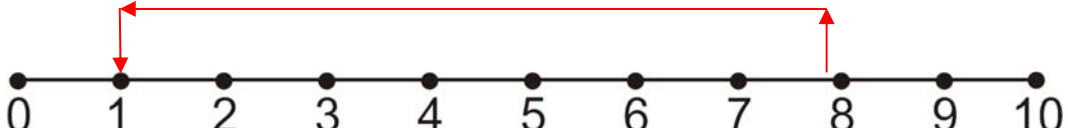
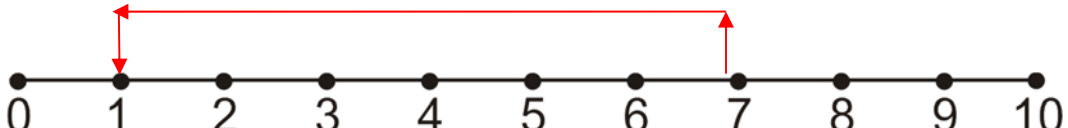
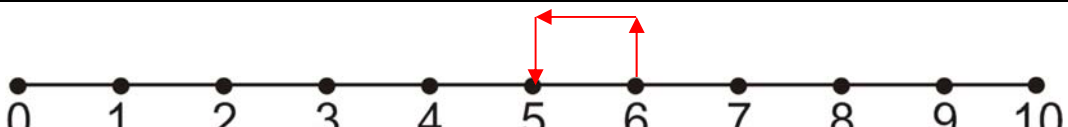


Name _____

Date _____

Topic: Number Line Subtraction- Worksheet 5 **ANSWERS**

Use the number line to find the answer.

1.	
2.	
3.	
4.	
5.	
6.	
7.	
8.	
9.	
10.	