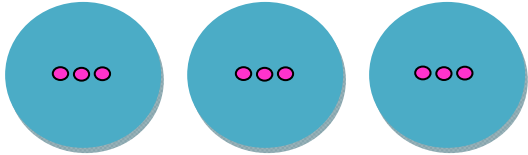


Name _____


Date _____

Visual Multiplication Practice



Write the problem that is represented by the drawing.

	$\underline{\quad} \times \underline{\quad}$
---	--

This means 'three times the group of three'. Write the answers in the blanks provided.

	$\underline{3} \times \underline{3}$
---	--------------------------------------

Practice Problems

1		$\underline{\quad} \times \underline{\quad}$
2		$\underline{\quad} \times \underline{\quad}$

