

Name _____


Date _____

Visual Multiplication - Guided Lesson

Solve the following multiplication problems:

1)


6 rows of 4



$$6 \times 4 = \underline{\quad}$$

2)

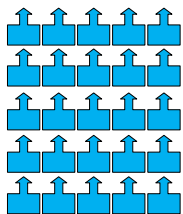
3 rows of 5



$$3 \times 5 = \underline{\quad}$$

3)

5 rows of 5



$$5 \times 5 = \underline{\quad}$$

