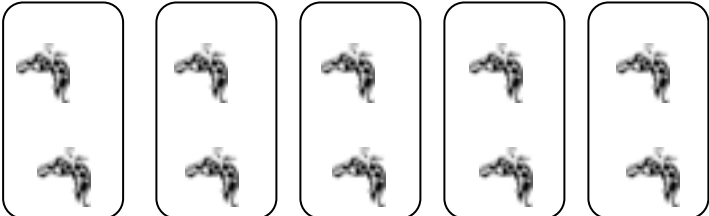
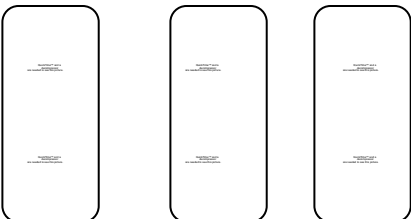
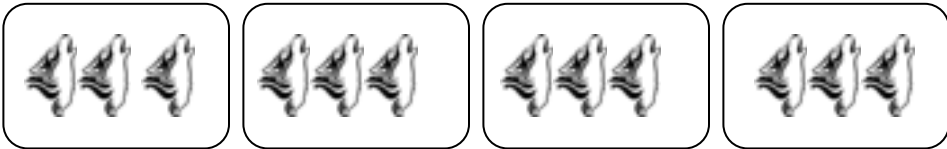
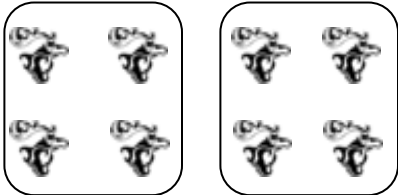

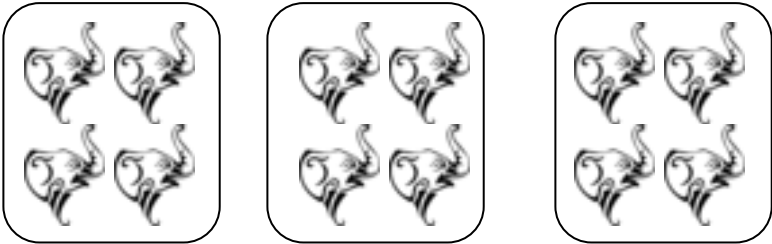


Write the Problem: Sets (with help)

Write the problem for each set of pictures.

4 X 3	2 X 4	5 X 2	3 X 2	6 X 1	3 X 4
-------	-------	------------------	-------	-------	-------

	<p style="text-align: center;"><u>5 X 2</u></p>
	<p style="text-align: center;">_____</p>
	<p style="text-align: center;">_____</p>
	<p style="text-align: center;">_____</p>
	<p style="text-align: center;">_____</p>
	<p style="text-align: center;">_____</p>

