


Name \_\_\_\_\_

Date \_\_\_\_\_


## Using Multiplication Arrays Lesson

Fill in the missing numbers:

	
---	--



\_\_\_\_ rows, \_\_\_\_ dogs in each row.  
\_\_\_\_ + \_\_\_\_ dogs  
\_\_\_\_ x \_\_\_\_ dogs = \_\_\_\_

Count the number of dogs in the two groups. There are 5 dogs in each row. When we count all the dogs together, we get the total as 10.

	5
	+ 5
	10

\_\_2\_\_ rows, \_\_5\_\_ dogs in each row.  
\_\_5\_\_ + \_\_5\_\_ dogs  
\_\_2\_\_ x \_\_5\_\_ dogs = \_\_10\_\_

### Practice Problems

1		
	____ rows, ____ butterflies in each row ____ + ____ butterflies ____ x ____ butterflies = ____	
2		
	____ rows, ____ drums in each row ____ + ____ drums ____ x ____ drums = ____	

