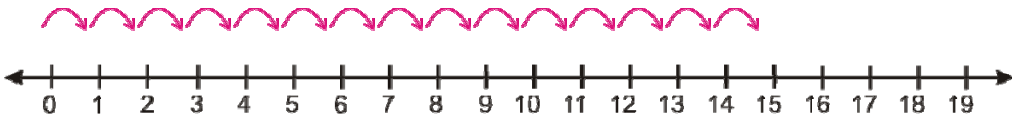
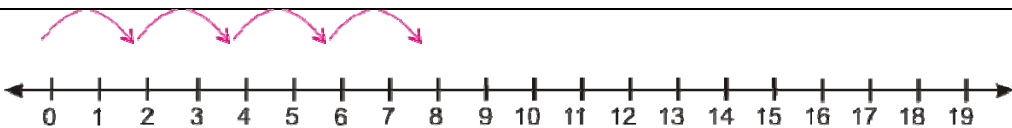
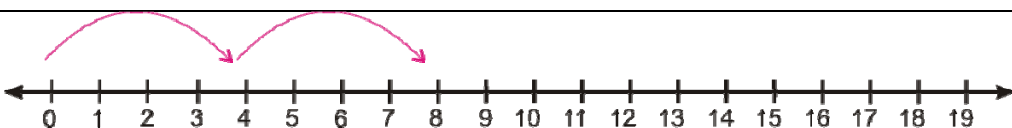


Name _____ Date _____

Multiplication Skill Warm up

Write the multiplication sentence that the jumps on the number line illustrate.

1	 _____ x _____ = _____
2	 _____ x _____ = _____
3	 _____ x _____ = _____

4. $4 \times 2 =$ _____

5. $4 \times 3 =$ _____

6. $4 \times 4 =$ _____

7. $4 \times 5 =$ _____

