
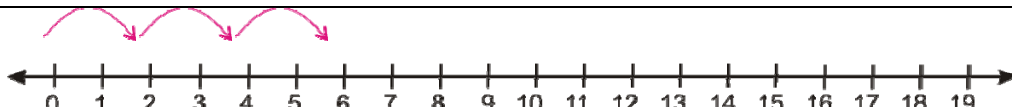
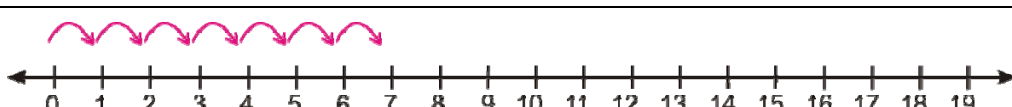
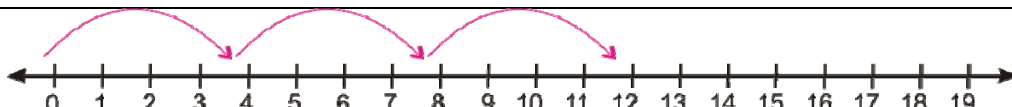
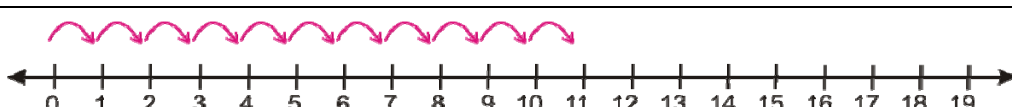
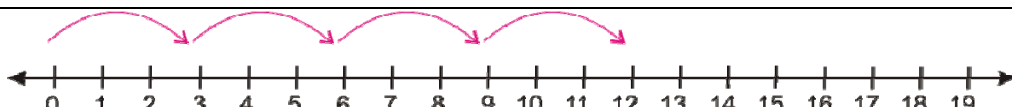
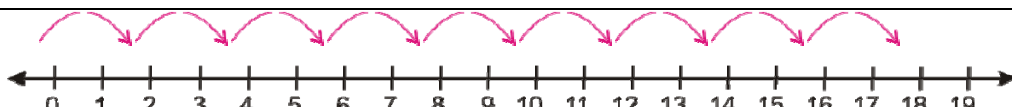
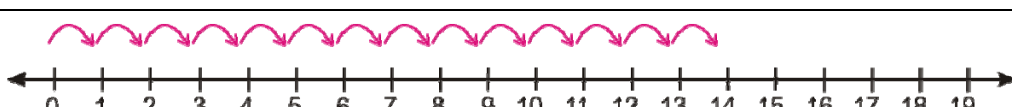


Name \_\_\_\_\_ Date \_\_\_\_\_

## Practice Worksheet 1

Write the multiplication sentence that the jumps on the number line illustrate.

1	 _____ x _____ = _____
2	 _____ x _____ = _____
3	 _____ x _____ = _____
4	 _____ x _____ = _____
5	 _____ x _____ = _____
6	 _____ x _____ = _____
7	 _____ x _____ = _____
8	 _____ x _____ = _____



## Practice Worksheet 1

1

$9 \times 1 = 9$

2

$3 \times 2 = 6$

3

$7 \times 1 = 7$

4

$3 \times 4 = 12$

5

$11 \times 1 = 11$

6

$4 \times 3 = 12$

7

$9 \times 2 = 18$

8

$14 \times 1 = 14$

