

Name _____ Date _____

Fixed Number Multiplication and Number Lines Guided Lesson

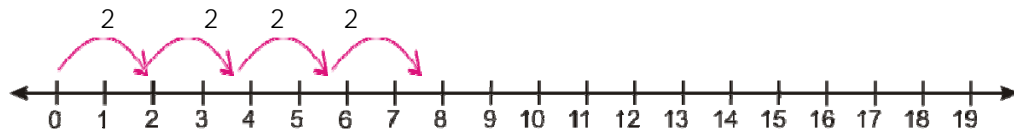
Write the multiplication sentence that the jumps on the number line illustrate.



Write the multiplication represented on the number line?

_____ x _____ = _____

Solution:



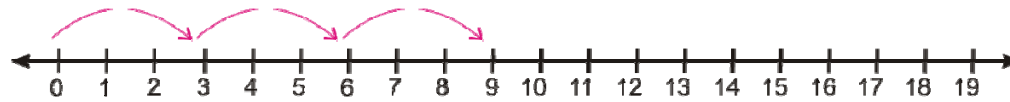
Four jumps, each jumps is two steps.

 4 x 2 = 8

 4 x 2 = 8

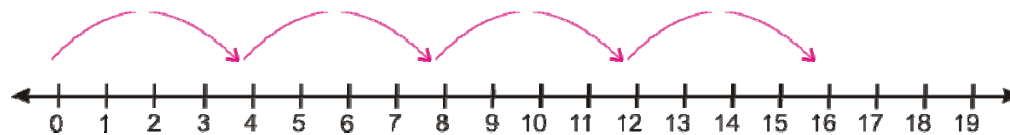
Practice problems:

1



_____ x _____ = _____

2



_____ x _____ = _____

