









Name \_\_\_\_\_

Date \_\_\_\_\_

Topic: How Much Change Will You Get? - Worksheet 1

7.	<p>You have</p>  <p><b>\$18.40</b></p> <p><b>\$11.91</b></p> <p>Change: <input type="text"/></p>	2.	<p>You have</p>  <p><b>\$31.33</b></p> <p><b>\$19.16</b></p> <p>change: <input type="text"/></p>
3.	<p>You have</p>  <p><b>\$22.00</b></p> <p><b>\$17.25</b></p> <p>Change: <input type="text"/></p>	4.	<p>You have</p>  <p><b>\$23.09</b></p> <p><b>\$14.30</b></p> <p>Change: <input type="text"/></p>
5.	<p>You have</p>  <p><b>\$20.01</b></p> <p><b>\$10.70</b></p> <p>Change: <input type="text"/></p>	6.	<p>You have</p>  <p><b>\$45.00</b></p> <p><b>\$26.40</b></p> <p>Change: <input type="text"/></p>
7.	<p>You have</p>  <p><b>\$11.63</b></p> <p><b>\$8.43</b></p> <p>Change: <input type="text"/></p>	8.	<p>You have</p>  <p><b>\$7.11</b></p> <p><b>\$2.22</b></p> <p>Change: <input type="text"/></p>



Name \_\_\_\_\_

Date \_\_\_\_\_

Topic: How Much Change Will You Get? - Worksheet 1 **ANSWERS**

1. **\$6.49**

2. **\$12.17**

3. **\$4.75**

4. **\$8.79**

5. **\$9.31**

6. **\$18.6**

7. **\$3.2**


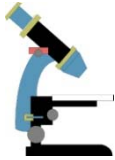






8. **\$4.89**



Name \_\_\_\_\_

Date \_\_\_\_\_

Topic: How Much Change Will You Get? - Worksheet 2

1.	<p>You have</p>  <p><math>\\$37.36</math></p> <p><math>\\$20.81</math></p> <p>Change: <input type="text"/></p>	2.	<p>You have</p>  <p><math>\\$91.63</math></p> <p><math>\\$10.20</math></p> <p>Change: <input type="text"/></p>
3.	<p>You have</p>  <p><math>\\$40.31</math></p> <p><math>\\$31.23</math></p> <p>Change: <input type="text"/></p>	4.	<p>You have</p>  <p><math>\\$73.03</math></p> <p><math>\\$43.88</math></p> <p>Change: <input type="text"/></p>
5.	<p>You have</p>  <p><math>\\$55.05</math></p> <p><math>\\$33.80</math></p> <p>Change: <input type="text"/></p>	6.	<p>You have</p>  <p><math>\\$93.57</math></p> <p><math>\\$21.66</math></p> <p>Change: <input type="text"/></p>
7.	<p>You have</p>  <p><math>\\$81.49</math></p> <p><math>\\$18.71</math></p> <p>Change: <input type="text"/></p>	8.	<p>You have</p>  <p><math>\\$84.17</math></p> <p><math>\\$13.44</math></p> <p>Change: <input type="text"/></p>



Name \_\_\_\_\_

Date \_\_\_\_\_

Topic: How Much Change Will You Get? - Worksheet 2 **ANSWERS**

1. **\$16.55**

2. **\$81.43**

3. **\$9.08**

4. **\$29.15**

5. **\$21.25**

6. **\$71.91**

7. **\$62.78**









8. **\$70.73**



Name \_\_\_\_\_

Date \_\_\_\_\_

Topic: How Much Change Will You Get? - *Worksheet 3*

7.	<p>You have</p>  <p><b>\$29.66</b></p> <p><b>\$13.48</b></p> <p>Change: <input type="text"/></p>	2.	<p>You have</p>  <p><b>\$96.77</b></p> <p><b>\$53.36</b></p> <p>Change: <input type="text"/></p>
3.	<p>You have</p>  <p><b>\$66.39</b></p> <p><b>\$36.44</b></p> <p>Change: <input type="text"/></p>	4.	<p>You have</p>  <p><b>\$81.09</b></p> <p><b>\$36.61</b></p> <p>Change: <input type="text"/></p>
5.	<p>You have</p>  <p><b>\$79.10</b></p> <p><b>\$53.99</b></p> <p>Change: <input type="text"/></p>	6.	<p>You have</p>  <p><b>\$47.28</b></p> <p><b>\$12.87</b></p> <p>Change: <input type="text"/></p>
7.	<p>You have</p>  <p><b>\$55.67</b></p> <p><b>\$19.83</b></p> <p>Change: <input type="text"/></p>	8.	<p>You have</p>  <p><b>\$60.59</b></p> <p><b>\$51.99</b></p> <p>Change: <input type="text"/></p>



Name \_\_\_\_\_

Date \_\_\_\_\_

Topic: How Much Change Will You Get? - Worksheet 3 ***ANSWERS***

1. ***\$16.18***

2. ***\$43.41***

3. ***\$29.95***

4. ***\$44.48***

5. ***\$25.11***

6. ***\$34.41***

7. ***\$35.84***









8. ***\$2.6***



Name \_\_\_\_\_

Date \_\_\_\_\_

Topic: How Much Change Will You Get? - *Worksheet 4*

<p>1.</p>	<p>You have</p>  <p>Change:</p>	<p>7.</p>	<p>You have</p>  <p>Change:</p>
<p>3.</p>	<p>You have</p>  <p>Change:</p>	<p>4.</p>	<p>You have</p>  <p>Change:</p>
<p>5.</p>	<p>You have</p>  <p>Change:</p>	<p>6.</p>	<p>You have</p>  <p>Change:</p>
<p>7.</p>	<p>You have</p>  <p>Change:</p>	<p>8.</p>	<p>You have</p>  <p>Change:</p>



Name \_\_\_\_\_

Date \_\_\_\_\_

Topic: How Much Change Will You Get? - Worksheet 4 **ANSWERS**

1.  **$\$20.27$**

2.  **$\$31.13$**

3.  **$\$13.92$**

4.  **$\$20.75$**

5.  **$\$21.42$**

6.  **$\$53.04$**

7.  **$\$64.4$**

8.  **$\$3.57$**












Name \_\_\_\_\_

Date \_\_\_\_\_

Topic: How Much Change Will You Get? - Worksheet 5

<p>1.</p>	<p>You have</p>  <p>Change:</p>	<p>2.</p>	<p>You have</p>  <p>Change:</p>
<p>3.</p>	<p>You have</p>  <p>Change:</p>	<p>4.</p>	<p>You have</p>  <p>Change:</p>
<p>5.</p>	<p>You have</p>  <p>Change:</p>	<p>6.</p>	<p>You have</p>  <p>Change:</p>
<p>7.</p>	<p>You have</p>  <p>Change:</p>	<p>8.</p>	<p>You have</p> <p>For Postage</p> <p>Change:</p>



Name \_\_\_\_\_

Date \_\_\_\_\_

Topic: How Much Change Will You Get? - Worksheet 5 ***ANSWERS***

1. ***\$1.76***

2. ***\$13.17***

3. ***\$14.19***

4. ***\$18.64***

5. ***\$27.24***

6. ***\$22.6***

7. ***\$41.84***

8. ***\$1.86***

