

Name _____

Date _____

Counting Pennies, Nickels, and Dimes Worksheet


Add the following and circle the correct option.

1 

24¢	42¢
-----	-----

2 

33¢	35¢
-----	-----

3 


37¢	73¢
-----	-----

4 


32¢	23¢
-----	-----

5 


34¢	39¢
-----	-----

6 

23¢	22¢
-----	-----

7 

38¢	36¢
-----	-----

8 

27¢	29¢
-----	-----



Name _____

Date _____

Answer Key

1 

24¢	42¢
-----	-----

2 

33¢	35¢
-----	-----

3 

37¢	73¢
-----	-----

4 

32¢	23¢
-----	-----

5 

34¢	39¢
-----	-----

6 

23¢	22¢
-----	-----

7 

38¢	36¢
-----	-----

8 

27¢	29¢
-----	-----

