



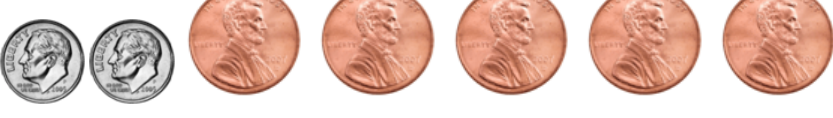







Name _____

Date _____

Counting Pennies and Dimes Worksheet

Count the total amount in cents. If the answer is correct, then put a check and if the answer is incorrect place a cross out in the box.

1		42¢	<input type="text"/>
2		37¢	<input type="text"/>
3		33¢	<input type="text"/>
4		55¢	<input type="text"/>
5		25¢	<input type="text"/>
6		28¢	<input type="text"/>
7		23¢	<input type="text"/>
8		25¢	<input type="text"/>
9		61¢	<input type="text"/>
10		52¢	<input type="text"/>



Name _____

Date _____

Answer Key

1. check
2. 32 cents
3. check
4. 51 cents
5. check
6. 13 cents
7. check
8. 15 cents
9. check
10. 22 cents

