

Name _____

Date _____

Counting Coins and Bills - Matching Worksheet

Match the word problems to their answers.

_____ 1. How much money is shown?



a. 1 bill of \$10, 2 bills of \$5, 1 quarter, 4 pennies.




_____ 2. Rosy places an order for pizza. The cost is \$4.47. How many bills and coins will she need?

b. 1 bill of \$10 and 1 bill of \$5, 1 dime.

_____ 3. Dolly has 1 bill for \$10 and 3 bills of \$5; she also has 1 quarter, 2 nickels, and 5 dimes. How much total money does she have?

c. \$25.75. 1 - \$5 bill and 2 - \$10 bills. 2 quarters and 5 nickels.

_____ 4. Lara has \$15.10. What bills and coin does she have in her pocket?



d. 4 dollar bills, 1 quarter, 2 dimes and 2 pennies.

_____ 5. Gerald has 3 bills and 5 coins worth \$20.29. If the coins are all quarters and pennies, how many dollars, quarters and pennies does he have?

e. 10 bills of \$10 and 6 bills of \$5.

_____ 6. Natasha has \$500. She purchases a camera worth \$230, a computer worth \$30, curtains worth \$10, and an iPhone worth \$100. She has 16 bills left. How many and what type of bills does she have?

f. \$125.69

_____ 7. Lana has a \$5 bill and 2 quarters. Silva gives her \$20.25. If the coins that Silva gave her are all nickels, how many total bills and coins does she have?

g. \$25.85

_____ 8. Jessica has 10 - \$10 bills and 5- \$5 bills. She also has 5 dimes, 3 nickels and 4 pennies. How much money does she have?

h. \$26

