

Name _____

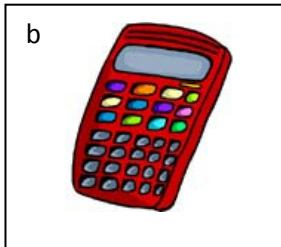

Date _____

Who Weighs More or Less - Matching Worksheet

Write the letter of the answer that matches the problem.

1. Circle the item that weighs more.

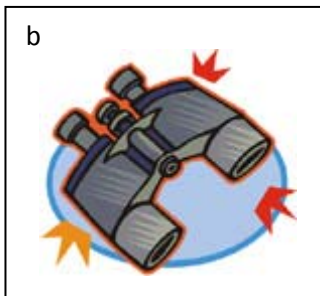
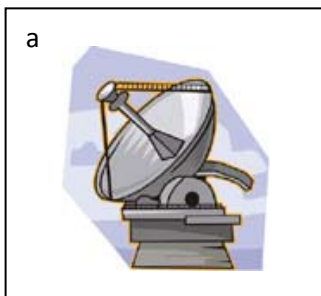
y



a.

2. Circle the item that weighs less.

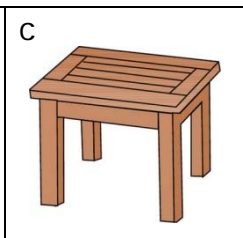
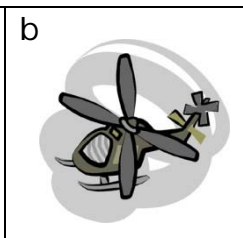
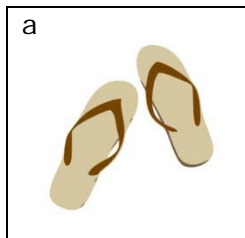
b,c,a



b.

3. Write the numbers 1, 2, and 3 to order the objects from heaviest to lightest.

a



c.

4. Circle the item that weighs more.

b



d.

