



Name \_\_\_\_\_

Date \_\_\_\_\_

## Comparing Size and Quantity Worksheet



Mr. Parker has to arrange a few articles for fishing. The few articles are given below. Put a mark under the matching article in the table corresponding to that article. Put the total in the box below.





Which article does Mr. Parker have the least of?



	
✓	✓
✓	
✓	

3

1

So, Mr. Parker has the least number of **books**.

Practice Problems



1 	2 




Name \_\_\_\_\_

Date \_\_\_\_\_

## Answer Key

1 	2 
<input checked="" type="checkbox"/>	<input checked="" type="checkbox"/>
<input checked="" type="checkbox"/>	<input checked="" type="checkbox"/>

2

2

