

Name _____

Date _____


Topic : Which weighs more/less? – Worksheet 1

Circle the image that weighs more.

1. Jam or Bag .



2. Telescope or keys.



3. Torch or Books .




4. Salad or Net.



5. Teddy or Balloon.



6. Color or Truck.



Name _____

Date _____


7. Kite or Lunch box.




8. Cake or Doll.



9. Slider or Soup.



10. Trumpet or Dolphin.



Name _____

Date _____

Topic : Which weighs more/less? - Worksheet 1 **ANSWERS**

Circle the image that weighs more.

1.



2.



3.



4.



5.



6.



7.




8.



9.



10.



Name _____

Date _____

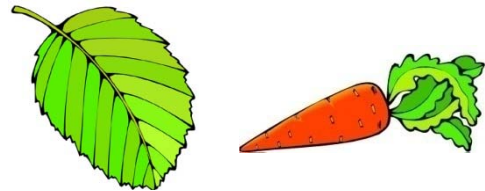
Topic : Which weighs more/less? - Worksheet 2

Circle the image that weighs more.


1. Jeep or Whale .



2. Leaf or Carrot.



3. Tractor or Tomato .



4. Tree or Umbrella.



5. Sword or Watch.



6. Bat or Fly.




Name _____

Date _____

7. Helicopter or Ink.




8. Swim Glasses or Octopus.



9. Camera or Ice Cream.



10. Hammer or Corn.



Name _____

Date _____


Topic : Which weighs more/less? - Worksheet 2 **ANSWERS**

Circle the image that weighs more.

1.




2.




3.




4.



5.




6.



7.



8.



9.



10.



Name _____

Date _____

Topic: Which weighs more/less? - Worksheet 3

Circle the image that weighs more.


1. House or shake.



2. Book or Bus.



3. Elephant or Rat .



4. Cycle or Jelly.



5. Camel or Fish.



6. Lion or Ball.




Name _____

Date _____

7. Bike or Airplane.




8. Puppy or car.



9. Chicken or Pizza.



10. Butterfly or Duck.



Name _____

Date _____

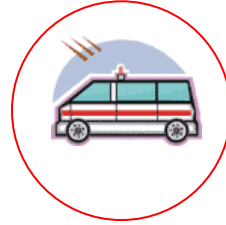
Topic: Which weighs more/less? - Worksheet 3 **ANSWERS**

Circle the image that weighs more.


1.



2.




3.




4.



5.



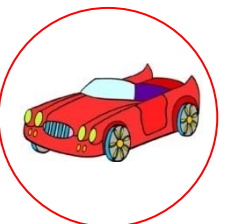
6.



7.




8.



9.



10.



Name _____

Date _____


Topic : Which weighs more/less? - Worksheet 4

Circle the image that weighs more.

1. Fan or Ear Ring .



2. Giraffe or Tank.



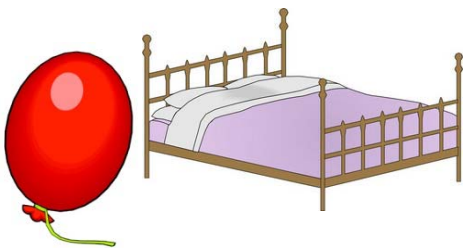
3. Bottle or Fruits .




4. Hat or Drums.



5. Balloon or Bed.



6. Jam or Butter Fly.



Name _____

Date _____


7. Comb or Bell.



8. Cake or Candle.



9. Ship or Guitar.



10. Bowl or Chair.



Name _____

Date _____

Topic : Which weighs more/less? - Worksheet 4 **ANSWERS**

Circle the image that weighs more.

1.



2.



3.



4.



5.



6.




7.



8.



9.



10.




Name _____

Date _____

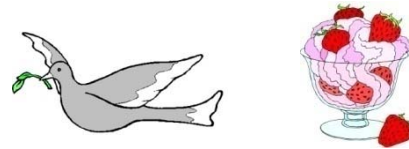
Topic: Which weighs more/less? - Worksheet 5

Circle the image that weighs more.


1. Cap or Sheep .



2. Bird or Ice Cream.



3. Snake or Flower .




4. Spider or Clock.



5. Ship or Bird.



6. Parrot or Gun.




Name _____

Date _____


7. Frog or Ring.



8. Chair or Crown.



9. Fly or Cup.



10. Fan or Car.



Name _____

Date _____


Topic: Which weighs more/less? - Worksheet 5 **ANSWERS**

Circle the image that weighs more.

1.




2.



3.



4.




5.



6.



7.



8.



9.



10.

