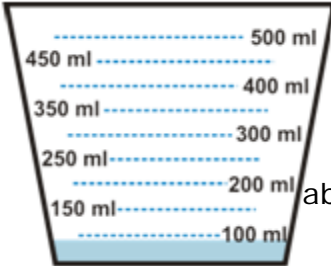
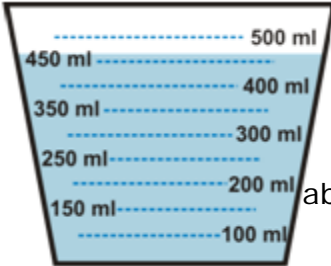
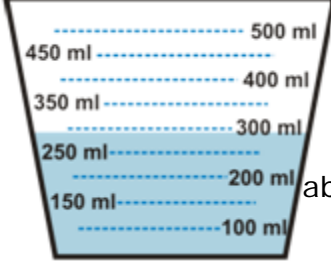
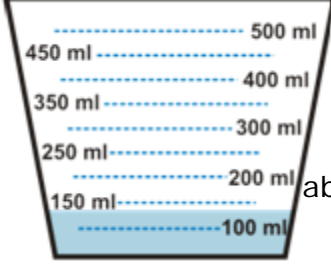
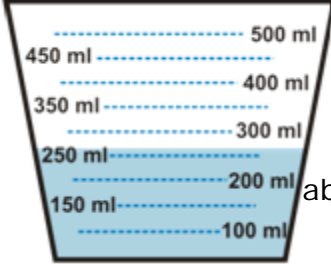
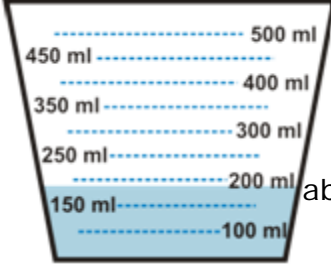
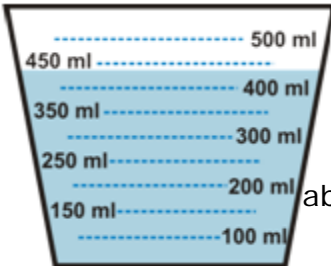
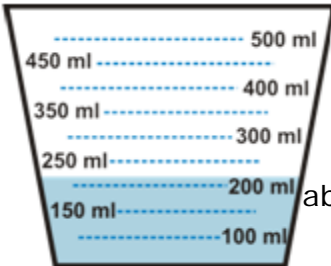
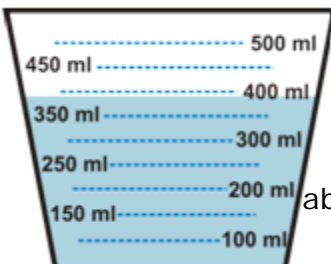
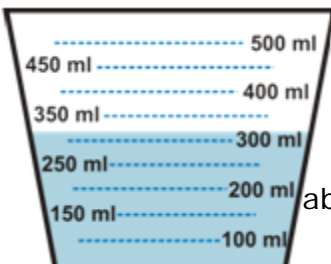


Name _____

Date _____

Reading Measuring Cups Worksheet

How many milliliters of liquid are in the measuring cup?

1	 <p>about ____ ml</p>	2	 <p>about ____ ml</p>
3	 <p>about ____ ml</p>	4	 <p>about ____ ml</p>
5	 <p>about ____ ml</p>	6	 <p>about ____ ml</p>
7	 <p>about ____ ml</p>	8	 <p>about ____ ml</p>
9	 <p>about ____ ml</p>	10	 <p>about ____ ml</p>

