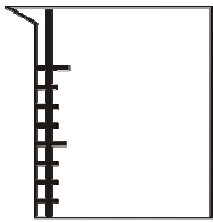
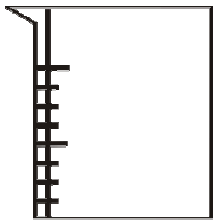
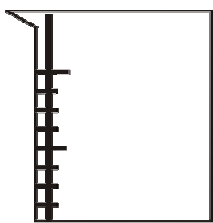
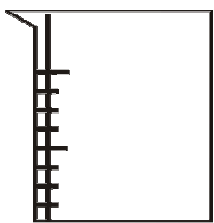
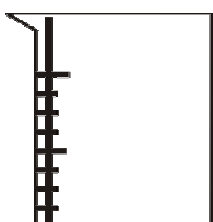
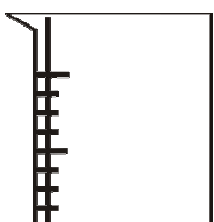
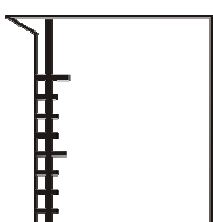
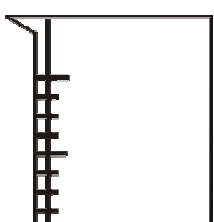
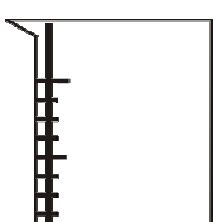
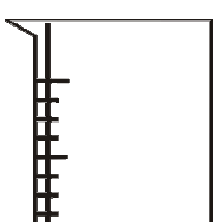


Name \_\_\_\_\_

Date \_\_\_\_\_

### Measuring Volume with A Beaker

The measuring cup can hold 2 cups when full. Draw to fill it to the given level.

1	 1 cup	2	 $\frac{1}{2}$ cups
3	 $\frac{3}{4}$ cups	4	 $1 \frac{1}{2}$ cups
5	 $\frac{1}{4}$ cups	6	 $\frac{2}{4}$ cups
7	 $1 \frac{1}{4}$ cups	8	 $1 \frac{6}{8}$ cups
9	 $1 \frac{3}{4}$ cups	10	 2 cups

