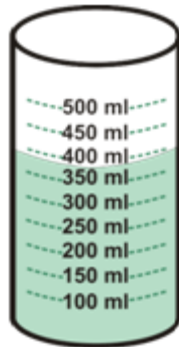


Name _____

Date _____

Measuring Three Dimensional Liquid Volume

Write what amount in milliliters the level of liquid is closest to.



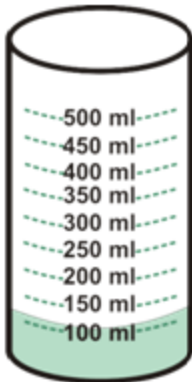
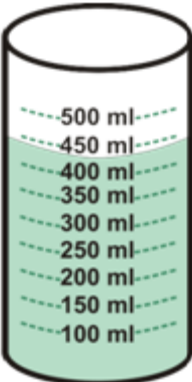
about _____ ml

Read the filled cup to the appropriate line, so that the level of the liquid is nearest to the line. Read it with your eye at the level of the liquid.

Water surface curves downward, so use the bottom of the curve for accurate measurement and not the edge that is against the measuring cup.

Answer: about 400 ml

Practice Problems

1	 <p>about _____ ml</p>	2	 <p>about _____ ml</p>
---	---	---	--

