

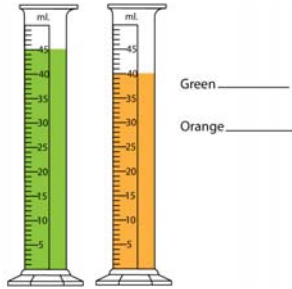
Name _____

Date _____

Measuring Liquid Volume - Matching Worksheet

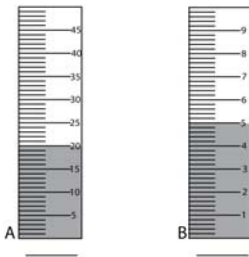
Write the letter of the answer that matches the problem. We removed the units.

_____ 1. What is the reading in milliliters for each cylinder?



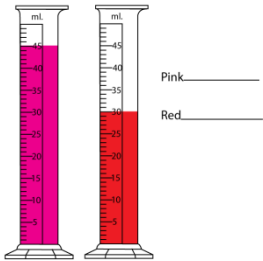
- a. Pink- 45
Red- 30

_____ 2. What is the reading in millimeters for each cylinder?



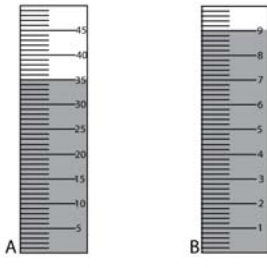
- b. A- 35
B- 9

_____ 3. What is the reading in milliliters for each cylinder?



- c. Green- 45
Orange- 40

_____ 4. What is the reading in millimeters for each cylinder?



- d. A-30
B- 5

