

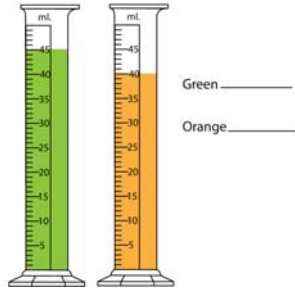
Name _____

Date _____

Measuring Liquid Volume - Matching Worksheet


Write the letter of the answer that matches the problem.

_____ 1. Read both of these cylinders. Determine what each line (increment means). These units are milliliters (mL).



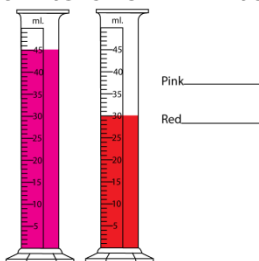
- a. Pink- 45
Red- 30

_____ 2. Carefully read the following graduated cylinders. Remember to read at the meniscus, and to put the units with your answers! What is the reading for each graduated cylinder? Units are in milliliters.



- b. A-20
B- 5

_____ 3. Read both of these cylinders. Determine what each line (increment means). These units are milliliters (mL).



- c. Green- 45
Orange- 40

