

Name _____

Date _____

Topic: Estimate Metric Weight - Worksheet 1

Choose which unit of measurement should be used to accurately measure the weight of each item.

1.



- A. 4 kilograms
- B. 2 grams

2.



- A. 3 kilograms
- B. 3 grams

3.



- A. 10 kilograms
- B. 40 grams

4.



- A. 5 kilograms
- B. 80 grams

5.



- A. 15 kilograms
- B. 4 grams

6.



- A. 8 kilograms
- B. 10 grams

7.



- A. 20 kilograms
- B. 3 grams

8.



- A. 50 kilograms
- B. 500 grams

9.



- A. 3 kilograms
- B. 40 grams

10.



- A. 6 kilograms
- B. 400 grams



Name _____

Date _____

Topic: Estimate Metric Weight - Worksheet 2

Choose which unit of measurement should be used to accurately measure the weight of each item.

1.



- A. 5 kilograms
- B. 3 grams

2.



- A. 5 kilograms
- B. 600 grams

3.



- A. 11 kilograms
- B. 30 grams

4.




- A. 6 kilograms
- B. 300 grams

5.



- A. 12 kilograms
- B. 6 grams

6.



- A. 20 kilograms
- B. 20 grams

7.



- A. 3 kilograms
- B. 2 grams

8.



- A. 25 kilograms
- B. 25 grams

9.



- A. 3 kilogram
- B. 40 grams

10.



- A. 5 kilograms
- B. 500 grams



Name _____

Date _____

Topic: Estimate Metric Weight - Worksheet 3

Choose which unit of measurement should be used to accurately measure the weight of each item.

1.



- A. 6 kilograms
- B. 80 grams

2.



- A. 8 kilograms
- B. 800 grams

3.



- A. 10 kilograms
- B. 900 grams

4.



- A. 4 kilograms
- B. 400 grams

5.



- A. 8 kilograms
- B. 500 grams

6.



- A. 1 kilograms
- B. 200 grams

7.



- A. 6 kilograms
- B. 6 grams

8.



- A. 2 kilograms
- B. 2 grams



- A. 4 kilogram
- B. 60 grams

9.



- A. 5 kilograms
- B. 30 grams



Name _____

Date _____

Topic: Estimate Metric Weight - Worksheet 4

Choose which unit of measurement should be used to accurately measure the weight of each item.

1.



- A. 2 kilograms
- B. 8 grams

2.



- A. 20 kilograms
- B. 200 grams

3.



- A. 2 kilograms
- B. 400 grams

4.



- A. 2 kilograms
- B. 200 grams

5.



- A. 3 kilograms
- B. 800 grams

6.



- A. 1 kilograms
- B. 2 grams

7.



- A. 4 kilograms
- B. 9 grams

8.



- A. 4 kilograms
- B. 4 grams

9.



- A. 2 kilogram
- B. 5 grams

10.



- A. 3 kilograms
- B. 3 grams



Name _____

Date _____

Topic: Estimate Metric Weight - Worksheet 5

Choose which unit of measurement should be used to accurately measure the weight of each item.

1.



- A. 3 kilograms
- B. 200 grams

2.



- A. 2 kilograms
- B. 100 grams

3.



- A. 1 kilograms
- B. 100 grams

4.



- A. 4 kilograms
- B. 900 grams

5.




- A. 3 kilograms
- B. 300 grams

6.



- A. 2 kilograms
- B. 2 grams

7.



- A. 5 kilograms
- B. 800 grams

8.




- A. 2 kilograms
- B. 2 grams

9.



- A. 1 kilogram
- B. 5 grams

10.



- A. 2 kilograms
- B. 3 grams

