

Name: \_\_\_\_\_

Score: \_\_\_\_\_

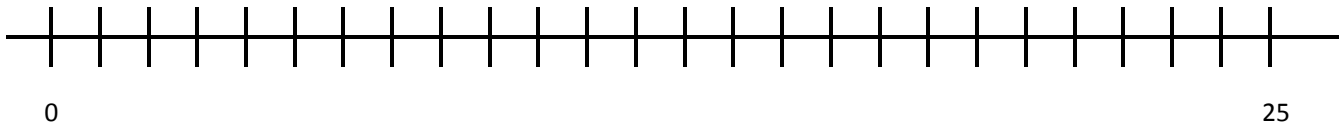
Teacher: \_\_\_\_\_

Date: \_\_\_\_\_

## Word Problem Solving using a Number Line Worksheet 5

Read the problem and use the provided number line to solve the problems. Also write a number sentence to match the problem.

- 1) Mike bought 20 packets of chips for his birthday party. He kept 4 packets with him and distributed the remaining to his friends attending his party. After the party he discovered 3 unopened packets of chips. How many packets of chips has he got?

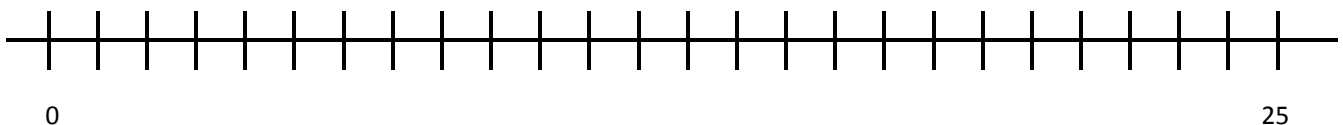


Number  
sentence:

Mike has

packets of chips.

- 2) There were 22 oranges in the basket. Out of these, 19 were eaten by kids. Mom bought one and a half dozens of oranges and refilled the basket. How many oranges are there in the basket?



Number  
sentence:

There are

oranges in the basket.

Name: \_\_\_\_\_

Score: \_\_\_\_\_

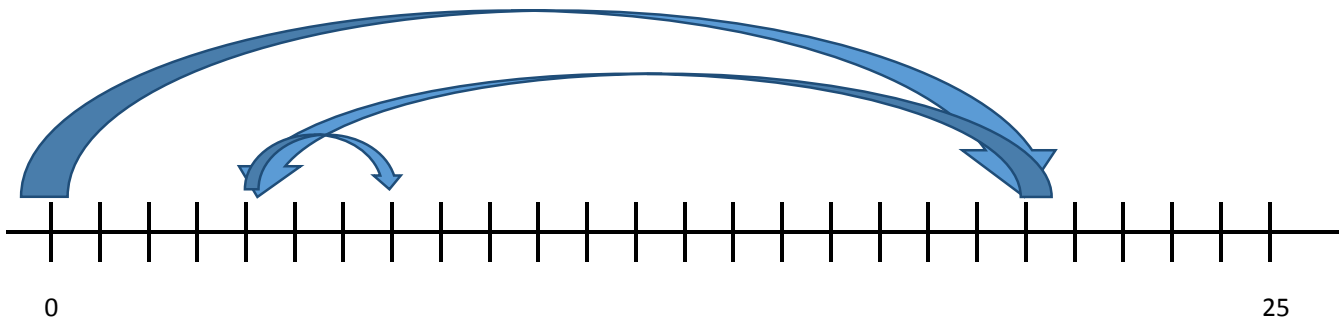
Teacher: \_\_\_\_\_

Date: \_\_\_\_\_

## Word Problem Solving using a Number Line Worksheet 5

Read the problem and use the provided number line to solve the problems. Also write a number sentence to match the problem.

- 1) Mike bought 20 packets of chips for his birthday party. He kept 4 packets with him and distributed the remaining to his friends attending his party. After the party he discovered 3 unopened packets of chips. How many packets of chips has he got?



Number  
sentence:

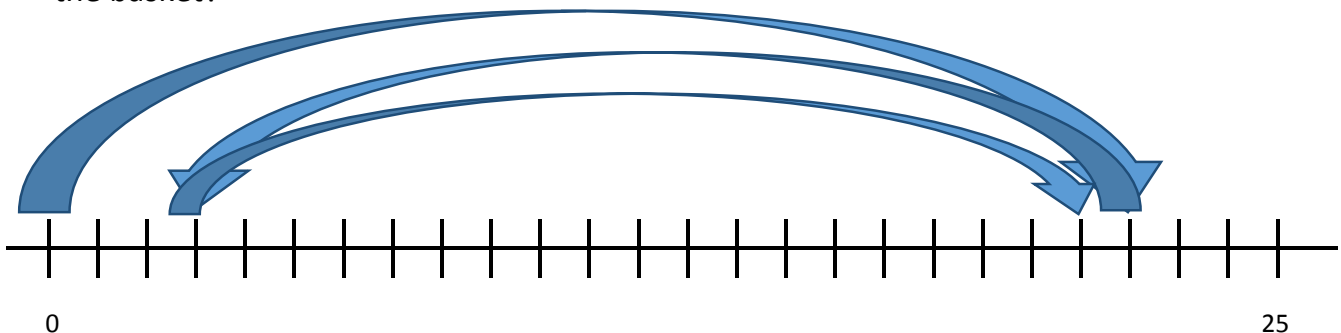
$$20 - 16 + 3 = 7$$

Mike has

7

packets of chips.

- 2) There were 22 oranges in the basket. Out of these, 19 were eaten by kids. Mom bought one and a half dozens of oranges and refilled the basket. How many oranges are there in the basket?



Number  
sentence:

$$22 - 19 + 18 = 21$$

There are

21

oranges in the basket.