

Name: _____

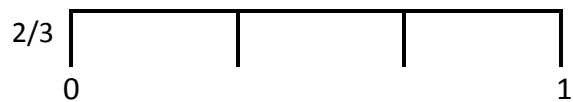
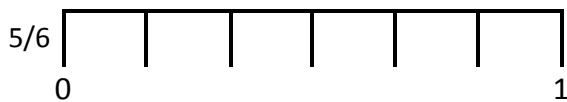
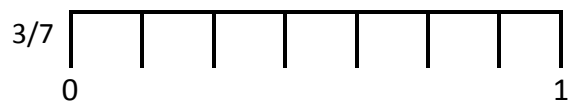
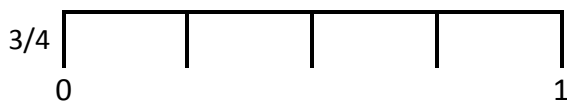
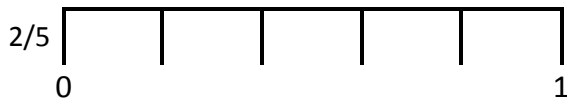
Score: _____

Teacher: _____

Date: _____

Fractions on the Number Line Worksheet 2

On each of the following number lines, find the fraction listed. Circle the correct line and write the fraction below it.



For each part of the following fractions, divide the number line into the correct number of equal parts. Mark the fraction on the number line.

