

Name _____

Date _____

Tally Charts- Guided Lesson

Complete the following problems:

1) Use the chart to answer the question.

Average Number of Students Attending Class

1 st week	2 nd week	3 rd week	4 th week

- During which week is the average number of students seen in class more than 20?
- What is the total number of students in the 1st and 4th week?
- How many more students were present in the 1st than the 3rd week?

2) See the tally chart to answer this question.

Fruits	Votes
Mango	
Apple	
Grapes	
Banana	

How many people answered the survey?





- | | | | |
|----|----|----|----|
| A. | 44 | B. | 47 |
| C. | 39 | D. | 41 |



Name _____

Date _____

3) Color the grid according to the tally marks to make a basic pictograph.

			
	/		/

