






Name _____

Date _____

Topic: Reading Picture Graphs - Worksheet 1

A survey was done asking people about their favorite color. The following data was obtained.

				
Red	Black	Yellow	Green	Blue
4	6	4	2	8

1	How many more people chose blue than red?	
2	What is the most popular color?	
3	What is the least popular color?	
4	Did more people choose green or blue?	
5	How many people did not choose black as their favorite color?	
6	How many people answered the survey?	
7	Did more people choose red or blue?	
8	How many people did not choose red as their favorite color?	
9	How many more people chose black than yellow ?	
10	Make a picture graph for the above data to show the result. Mark 'X' for each person's vote (next page).	



Name _____

Date _____

 Red								
 Yellow								
 Green								
 Blue								
 Black								








Name _____

Date _____

Topic : Reading Picture Graphs - Worksheet 2

A survey was done asking people about their favorite color. The following data was obtained.

				
Black	Red	Green	Yellow	Blue
6	4	3	8	2

1	How many more people chose yellow than green?	
2	What is the most popular color?	
3	What is the least popular color?	
4	Did more people choose yellow or black?	
5	How many people did not choose red as their favorite color?	
6	How many people answered the survey?	
7	Did more people choose red or green?	
8	How many people did not choose black as their favorite color?	
9	How many more people chose yellow than black?	
10	Make a picture graph for the above data to show the result. Mark 'X' for each person's vote (next page).	



Name _____

Date _____

 Black								
 Red								
 Green								
 Yellow								
 Blue								








Name _____

Date _____

Topic : Reading Picture Graphs - Worksheet 3

A survey was done asking people about their favorite color. The following data was obtained.

				
Green	Red	Black	Blue	Yellow
2	5	7	3	10

1	How many more people choose black than red?	
2	What is the most popular color?	
3	What is the least popular color?	
4	Did more people choose black or green?	
5	How many people did not choose blue as their favorite color?	
6	How many people answered the survey?	
7	Did more people choose black or green?	
8	How many people did not choose red as their favorite color?	
9	How many more people choose yellow than black?	
10	Make a picture graph for the above data to show the result. Mark 'X' for each person's vote (next page).	



Name _____

Date _____

 Green								
 Red								
 Black								
 Blue								
 Yellow								








Name _____

Date _____

Topic : Reading Picture Graphs - Worksheet 4

A survey was done asking people about their favorite color. The following data was obtained.

				
Blue	Red	Yellow	Green	Black
6	10	2	8	7

1	How many more people choose green than blue?	
2	What is the most popular color?	
3	What is the least popular color?	
4	Did more people choose red or yellow?	
5	How many people did not choose black as their favorite color?	
6	How many people answered the survey?	
7	Did more people choose green or yellow?	
8	How many people did not choose green as their favorite color?	
9	How many more people choose red than black?	
10	Make a picture graph for the above data to show the result. Mark 'X' for each person's vote (next page).	



Name _____

Date _____

 Blue								
 Red								
 Yellow								
 Green								
 Black								








Name _____

Date _____

Topic : Reading Picture Graphs - Worksheet 5

A survey was done asking people about their favorite color. The following data was obtained.

				
Red	Yellow	Blue	Black	Green
8	3	5	10	4

1	How many more people choose red than green?	
2	What is the most popular color?	
3	What is the least popular color?	
4	Did more people choose green or yellow?	
5	How many people did not choose yellow as their favorite color?	
6	How many people answered the survey?	
7	Did more people choose red or blue?	
8	How many people did not choose blue as their favorite color?	
9	How many more people choose black than red?	
10	Make a picture graph for the above data to show the result. Mark 'X' for each person's vote (next page).	



Name _____

Date _____

 Red								
 Yellow								
 Blue								
 Black								
 Green								

