







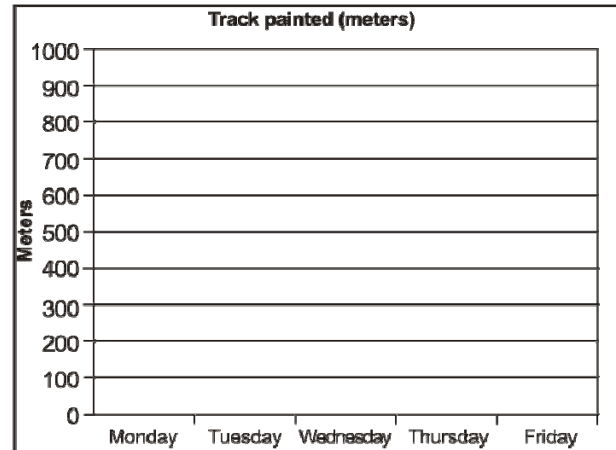
Name _____

Date _____

Painting the Track Pictograph

The pictograph shows how many meters John paints a track on different days. Each  symbol represents 100 meters. Draw a bar graph and answer the questions that follow:

Day	
Monday	
Tuesday	
Wednesday	
Thursday	
Friday	



1	On which day did John paint the most? How much did he paint that day?
2	How many more meters did John paint on Monday than on Thursday?
3	How many fewer meters did John paint on Friday than on Wednesday?
4	What was the total number of meters of track that John painted on Tuesday and Friday?
5	On which day did John paint the least?
6	How many more meters did John paint on Wednesday than on Thursday?
7	How many fewer meters did John paint on Tuesday than on Monday?
8	What was the total length of the track that John painted in these days?

