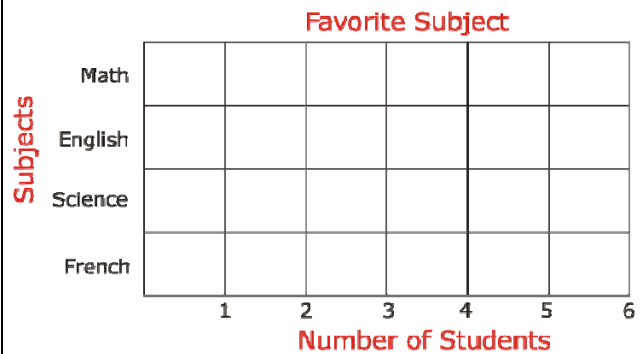



Name \_\_\_\_\_

Date \_\_\_\_\_

### Picture Graph to Bar Graph Transition Practice Worksheet 1

Use data from picture graph to make a bar graph and answer the questions.



1	How many students participated in the survey?
2	Which subjects is liked by most of the students?
3	Which subjects is liked by the least number of students?
4	How many students like French?
5	How many more students like Math than Science?
6	How many fewer students like Science than English?
7	How many more students like English than French?
8	How many students like Math?
9	The horizontal-axis denotes _____.
10	The survey was done for how many subjects?

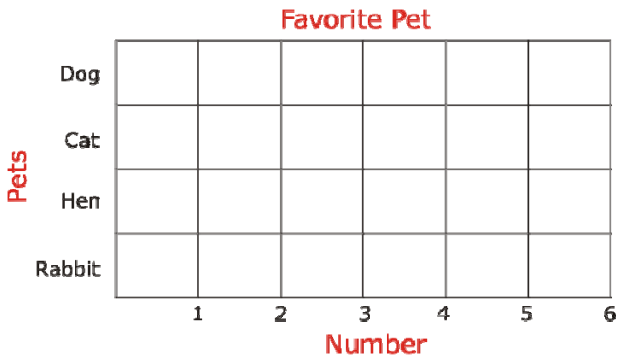



Name \_\_\_\_\_

Date \_\_\_\_\_

## Picture Graph to Bar Graph Transition Practice Worksheet 2

Use data from picture graph to make a bar graph and answer the questions.



1	How many people participated in the survey?
2	How many more people like Hen than Rabbit?
3	How many more people like Dog than Rabbit?
4	How many fewer people like Cat than Dog?
5	How many people like Cat?
6	Which pet is like by most of the people?
7	Which pet is liked by least number of people?
8	How many more people like cat than rabbit?

