







Name _____

Date _____

Picture Graphs - Matching Worksheet

Match the word problems to their answers. Write the letter of the answer that matches the problem.

Name	Cookies and Cakes
Alice	
Janis	
Nile	
Nora	

Each  = 3 Cookies, Each  = 4 Cakes

- _____ 1. Who has the most cookies? a. 42
- _____ 2. If cost of 1 cookie is \$4, how much did Janis pay for her cookies? b. 16
- _____ 3. Who has the most cakes? c. Alice
- _____ 4. How many cakes does Alice have? d. 56
- _____ 5. Who has 9 cookies? e. Nora
- _____ 6. Who has the second most number of cookies? f. \$24
- _____ 7. How many cakes do all 4 people have? g. Janis
- _____ 8. How many cookies do all 4 people have? h. Nile

