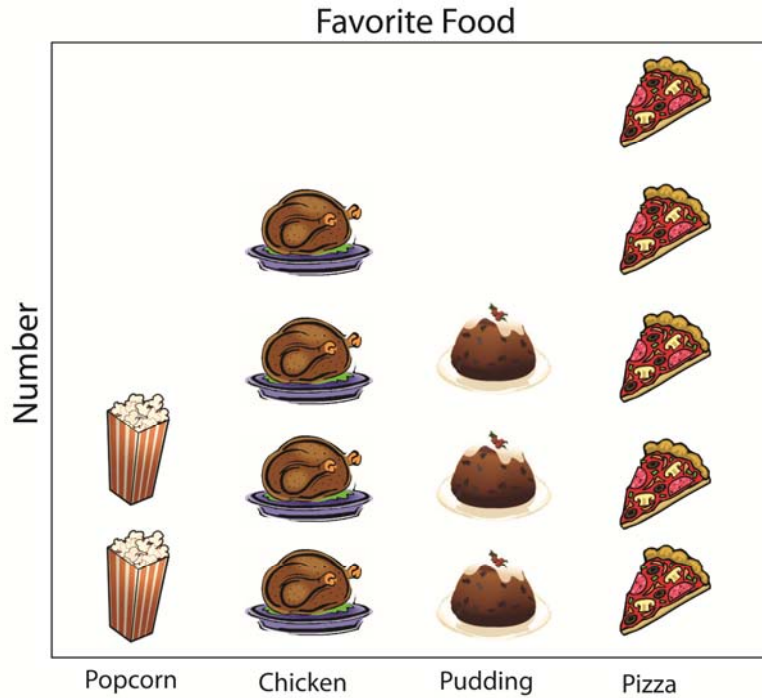


Name \_\_\_\_\_

Date \_\_\_\_\_

Topic: Reading Picture Graphs-Worksheet 1

Use the picture graphs to answer the questions



1. How many people chose popcorn as their favorite food?
2. How many more people chose chicken than pudding?
3. How many less people chose pudding than pizza?
4. How many people did not choose popcorn as their favorite food?
5. How many people were surveyed?




Name \_\_\_\_\_

Date \_\_\_\_\_

Topic: Reading Picture Graphs-Worksheet 2

Use the picture graphs to answer the questions



1. How many people chose cookies as their favorite food?
2. How many more people chose fries than cookies?
3. How many less people chose bread than burgers?
4. How many people did not choose cookies as their favorite food?
5. How many people were surveyed?

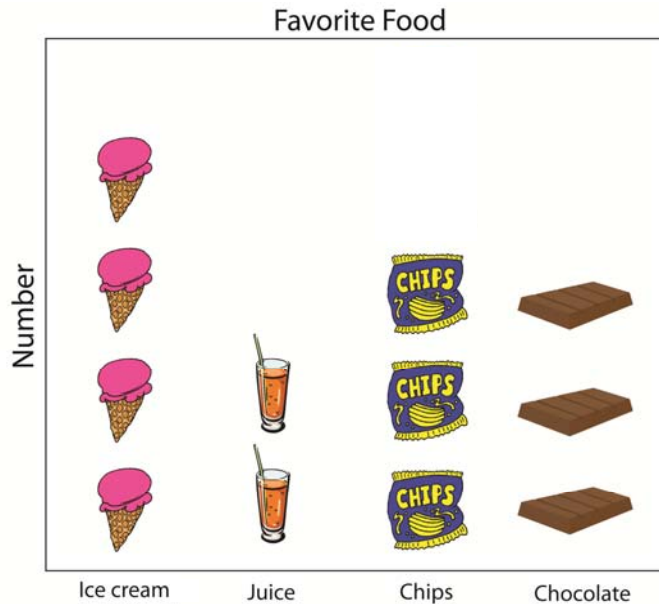


Name \_\_\_\_\_

Date \_\_\_\_\_

Topic: Reading Picture Graphs-Worksheet 3

Use the picture graphs to answer the questions



1. How many people chose ice cream as their favorite food?
2. How many more people chose chocolate than juice?
3. How many less people chose chips than ice cream?
4. How many people did not choose chips as their favorite food?
5. How many people were surveyed?

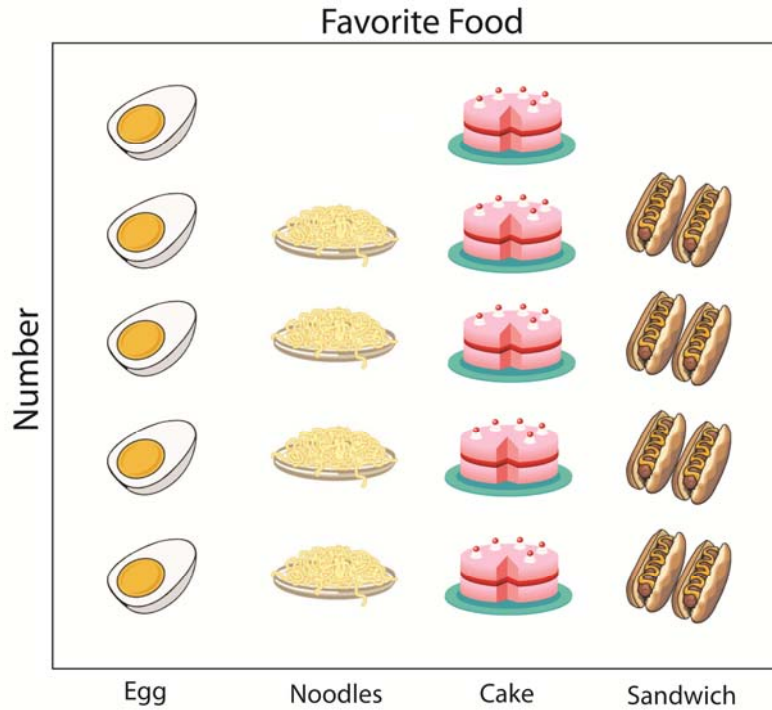


Name \_\_\_\_\_

Date \_\_\_\_\_

Topic: Reading Picture Graphs-Worksheet 4

Use the picture graphs to answer the questions



1. How many people chose cake as their favorite food?
2. How many more people chose cake than sandwiches?
3. How many less people chose noodles than eggs?
4. How many people did not choose cake as their favorite food?
5. How many people were surveyed?




Name \_\_\_\_\_

Date \_\_\_\_\_

Topic: Reading Picture Graphs-Worksheet 5

Use the picture graphs to answer the questions



1. How many people chose apples as their favorite food?
2. How many more people chose bananas than strawberries?
3. How many less people choose mangoes than bananas?
4. How many people did not choose strawberries as their favorite food?
5. How many people were surveyed?

