






Name \_\_\_\_\_

Date \_\_\_\_\_

## Burgers purchased by kids

Name	Number of burgers
Jose	
Kylie	
Jessica	
Kevin	

Where  = 2 burgers

Answer the question on the basis of the pictograph above.

1	How many burgers did Jose purchase?
2	How many burgers did Kylie purchase?
3	How many burgers did Jessica purchase?
4	How many burgers did Kevin purchase?
5	Who purchased the most burgers?
6	Who purchased the least burgers?
7	Who purchased 8 burgers?
8	Who purchased 12 burgers?
9	Who purchased 4 burgers?
10	Who purchased more burgers - Jose or Jessica?



Name \_\_\_\_\_

Date \_\_\_\_\_

### Answer Key

<input type="checkbox"/> 1	4	<input type="checkbox"/> 2	8	<input type="checkbox"/> 3	6	<input type="checkbox"/> 4	12	<input type="checkbox"/> 5	Kevin
<input type="checkbox"/> 6	Jose	<input type="checkbox"/> 7	Kylie	<input type="checkbox"/> 8	Kevin	<input type="checkbox"/> 9	Kylie	<input type="checkbox"/> 10	Jessica

