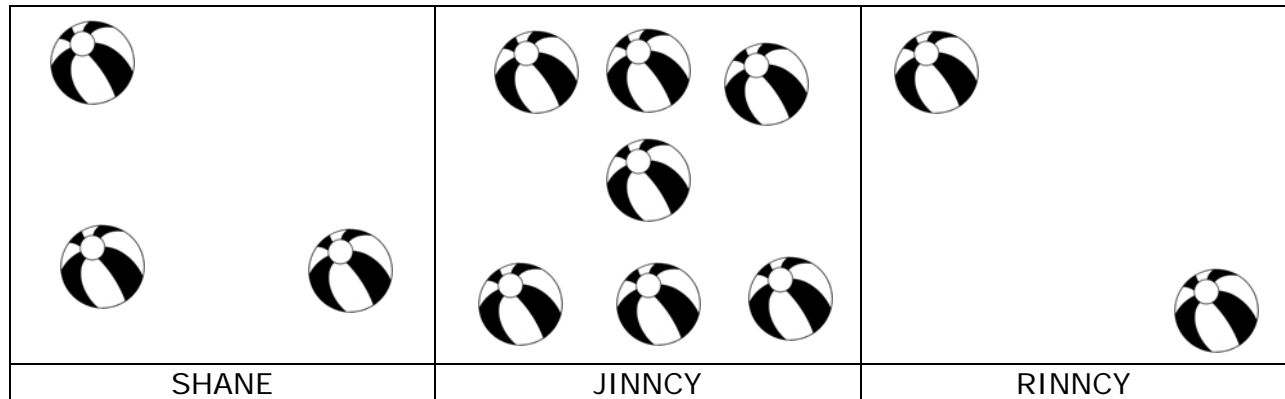


Name _____

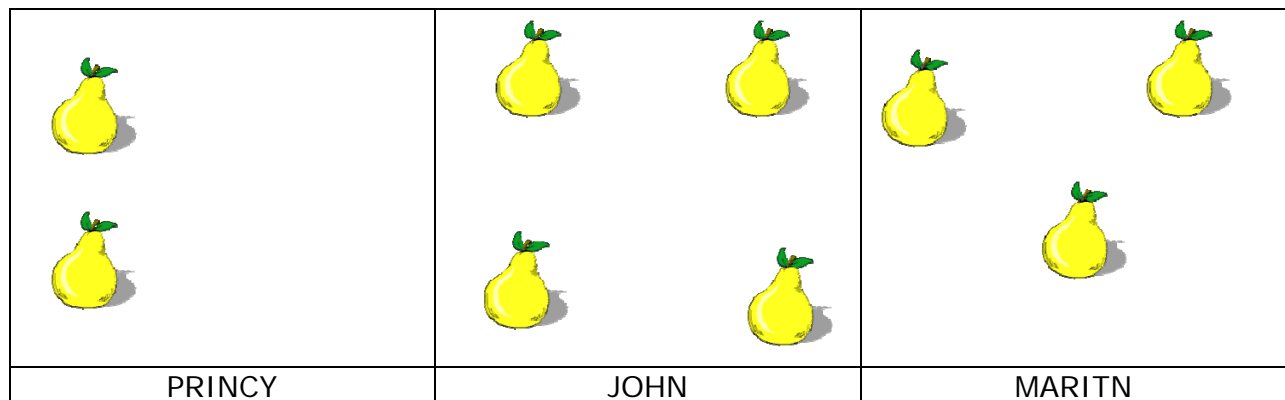
Date _____

Topic: Reading Picture Graph: Worksheet 1

Answer the following questions based on the picture graph



1. SHANE has _____ balls .
2. RINNCY has _____ balls less than RINNCY.
3. _____ has two balls .
4. JINNCY has _____ balls more than SHANE.
5. There are total of _____ balls.



1. _____ and _____ have the same number of PEAR.
2. JOHN has _____ PEAR.
3. There are total _____ PEAR.
4. JOHN has _____ PEAR more than MARITN.
5. PRINCY has _____ PEAR less than JOHN.

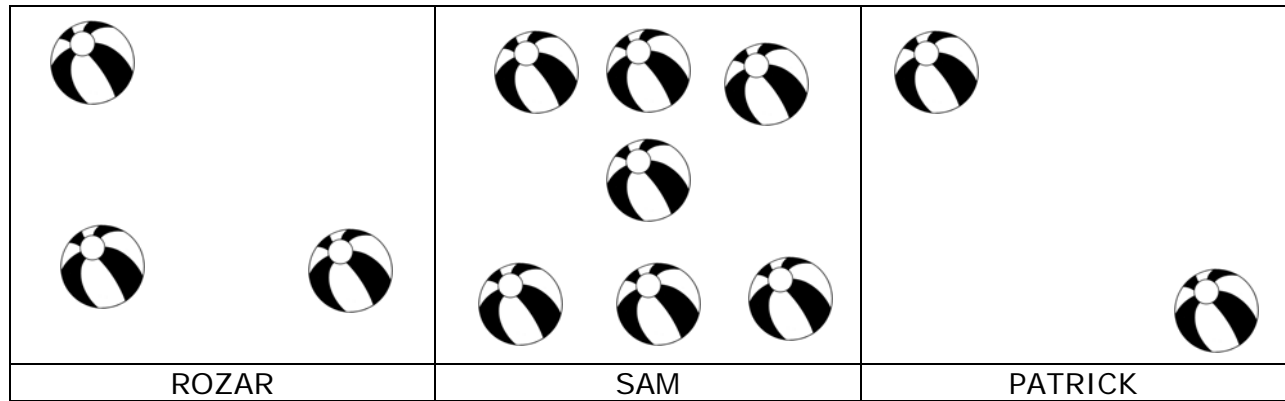


Name _____

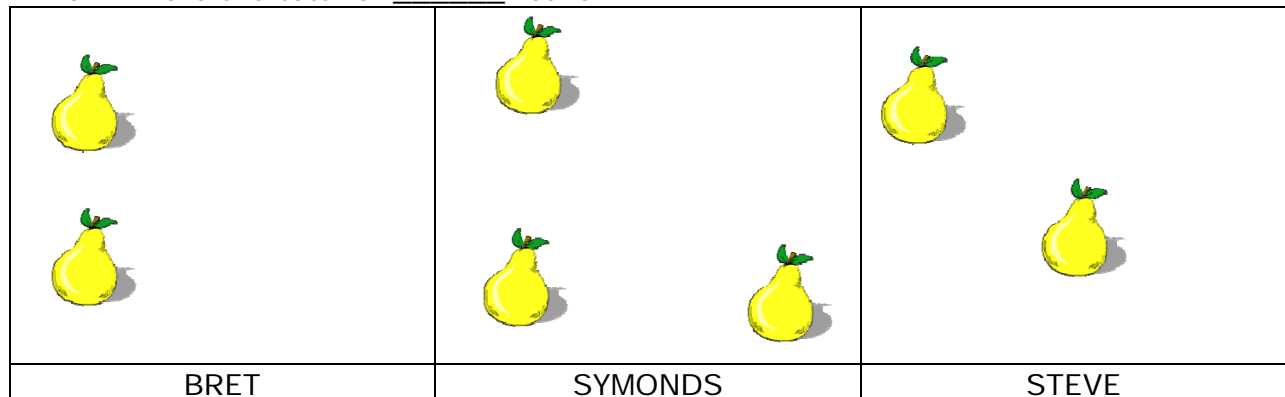
Date _____

Topic: Reading Picture Graph: Worksheet 2

Answer the following questions based on the picture graph



- ROZAR has _____ balls.
- ROZAR has _____ ball less than SAM.
- _____ has two balls .
- SAM has _____ balls more than PATRICK.
- There are total of _____ balls



- _____ and _____ have the same number of PEAR.
- SYMONDS has _____ PEAR.
- There are total _____ PEAR.
- SYMONDS has _____ PEAR more than STEVE.
- STEVE has _____ PEAR less than SYMONDS.

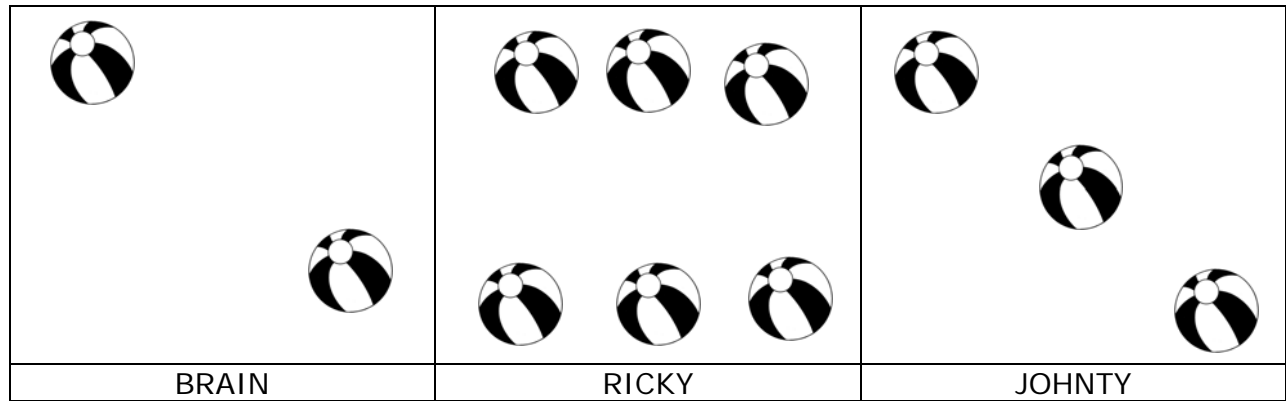


Name _____

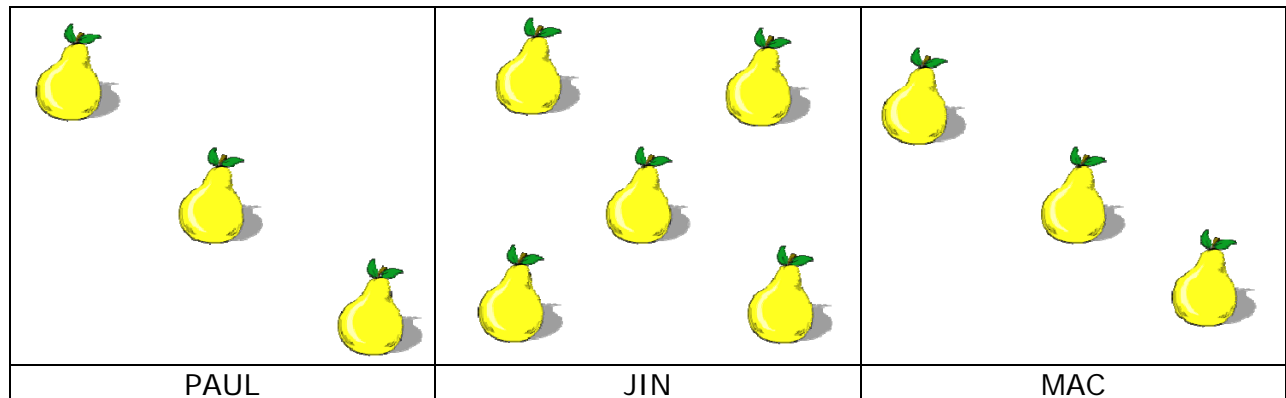
Date _____

Topic: Reading Picture Graph: Worksheet 3

Answer the following questions based on the picture graph



10. BRAIN has _____ balls.
11. JOHNTY has _____ ball less than RICKY.
12. _____ has two balls.
13. RICKY has _____ balls more than BRAIN.
14. There are total of _____ balls.



15. _____ and _____ have the same number of PEAR.
16. PAUL has _____ PEAR.
17. There are total _____ PEAR.
18. JIN has _____ PEAR more than MAC.
10. MAC has _____ PEAR less than PAUL.

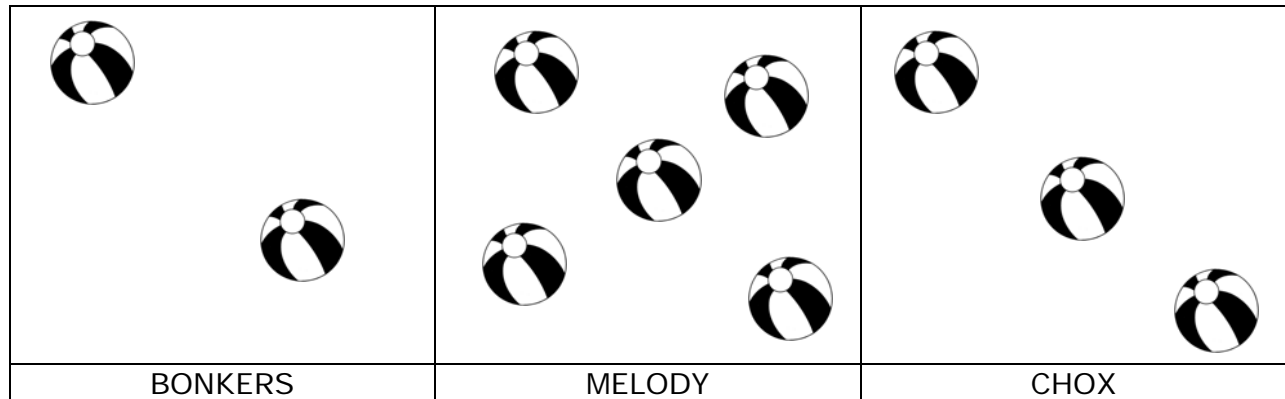


Name _____


Date _____

Topic: Reading Picture Graph: Worksheet 4

Answer the following questions based on the picture graph



1. BONKERS has _____ balls.
2. CHOX has _____ balls less than MELODY.
3. _____ has two balls.
4. CHOX has _____ balls more than BONKERS.
5. There are total of _____ balls.



6. _____ and _____ have the same number of PEAR.
7. TOBLERONE has _____ PEAR.
8. There are total _____ PEAR.
9. TOBLERONE has _____ PEAR more than TEMPTATION.
10. SILKY has _____ PEAR less than TEMPTATION.

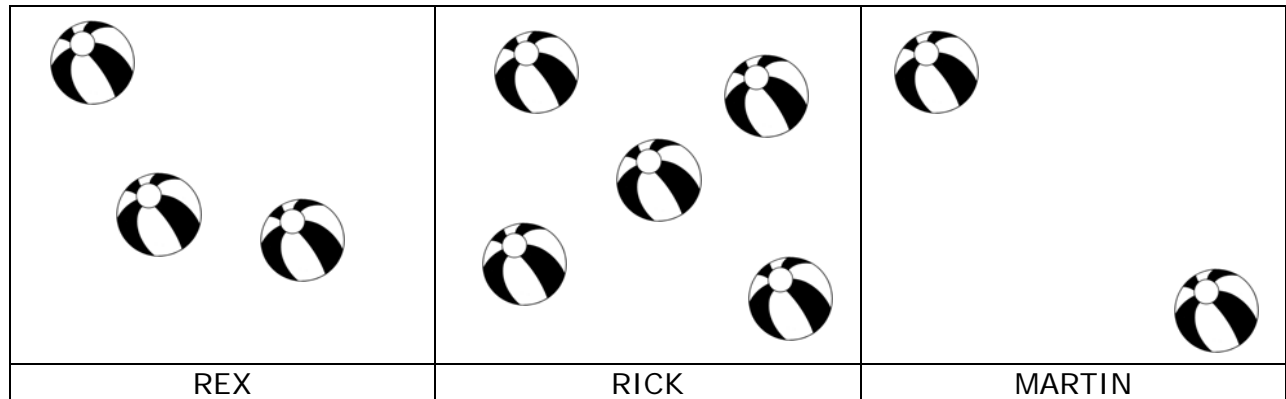


Name _____

Date _____

Topic: Reading Picture Graph: Worksheet 5

Answer the following questions based on the picture graph



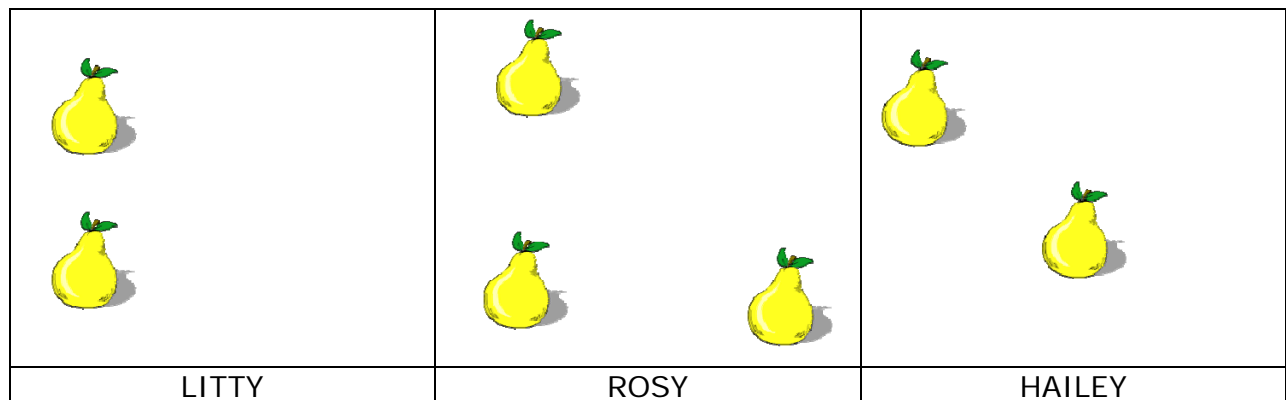
19. RICK has _____ balls.

20. MARTIN has _____ balls less than REX.

21. _____ has two balls.

22. RICK has _____ balls more than MARTIN.

23. There are total of _____ balls.



6. _____ and _____ have the same number of PEAR.

7. ROSY has _____ PEAR.

8. There are total _____ PEAR.

9. ROSY has _____ PEAR more than LITTY.

10. HAILEY has _____ PEAR less than ROSY.

