


Reading Bar Graphs - Guided Lesson

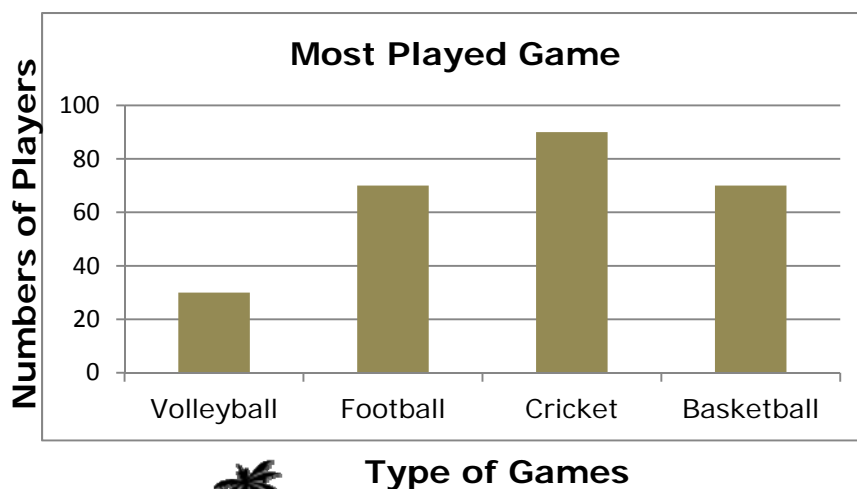
Complete the following problems:

- 1) In a school, children in class were surveyed about the scores they got on their last examination. This bar chart shows the data of the survey. Study the bar graph and answer the following questions.



- Find the total number of points scored by all students in all subjects?
- On which test did students do the best?
- In which two subjects did students get equal grades?
- What was the average score on the French exam?

- 2) Students in college were surveyed about their favorite sport to play. This bar chart shows the data of the survey. Study the bar graph and answer the following questions.

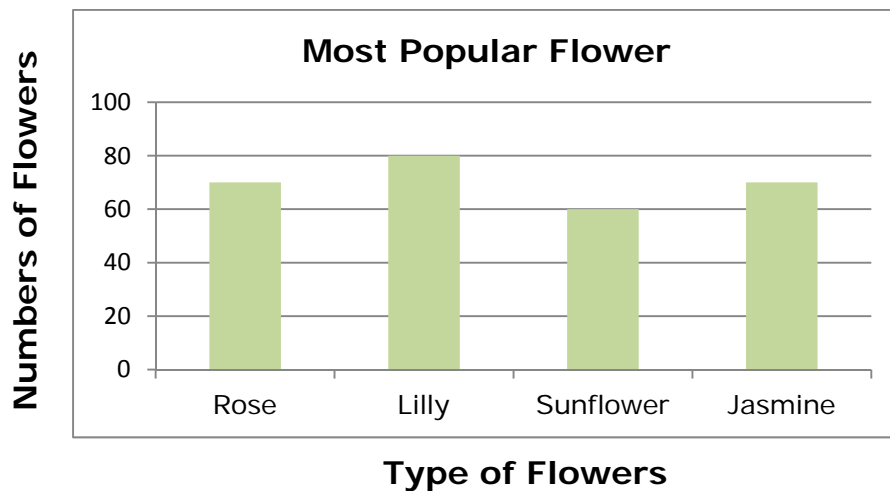


Name _____

Date _____

- a. Which is the most popular game?
- b. How many students in total were surveyed?
- c. Which is the least popular sport?
- d. Which two sports are equally as popular?

3) Children at the playground count the different types of flowers present on the play area. This bar chart shows the data. Study the bar graph and answer the following questions.



- a. Which is the most popular flower?
- b. How many total flowers were present?
- c. How many sunflowers were present?
- d. How many Roses and Jasmine flowers were present?

