

Name _____

Date _____

Pie or Circle Graphs Problems - Independent Practice Worksheet

Complete all the problems.

1. Make a pie graph for each set of data below. Label sections by coloring each section of graph and creating a key.

Student Name	Peter	John	Kitty	Rosy
Score	75	60	50	85
Color				

2. Make a pie graph for each set of data below. Label sections by coloring each section of graph and creating a key.

Favorite Flower	Rose	Camellia	Sunflower	Goldenrod	Peony
Votes	75	60	50	35	60
Color					

3. Make a pie graph for each set of data below. Label sections by coloring each section of graph and creating a key.

Favorite Subject	Science	Math	English	History
Like	60	80	90	50
Color				

4. Make a pie graph for each set of data below. Label sections by coloring each section of graph and creating a key.

Favorite color	Yellow	Red	Green	Blue	Pink
Votes	35	62	46	84	78
Color					

5. Make a pie graph for each set of data below. Label sections by coloring each section of graph and creating a key.




Favorite Language	English	Hindi	French	Russian
Like	85	60	70	50
Color				







Name _____

Date _____






6. Make a pie graph for each set of data below. Label sections by coloring each section of graph and creating a key.

Class	III	IV	V
Result	80	90	75
Color			





7. Make a pie graph for each set of data below. Label sections by coloring each section of graph and creating a key.

Country	America	England	Australia	Switzerland
Educated Population	85	90	80	85
Color				

8. Make a pie graph for each set of data below. Label sections by coloring each section of graph and creating a key.

Favorite Drink	Sprite	Mt. Dew	Coke	Dt. Coke	Pepsi
Vote	60	80	50	75	85
Color					

9. Make a pie graph for each set of data below. Label sections by coloring each section of graph and creating a key.

Favorite Fruit Juice	Orange Juice	Pineapple Juice	Papaya juice	Pomegranate Juice
Vote	75	60	50	85
Color				

10. Make a pie graph for each set of data below. Label sections by coloring each section of graph and creating a key.

Favorite Fruit	Mango	Apple	Cherry	Grapes	Strawberry
Like	75	60	50	85	80
Color	