

Name _____

Date _____

Making Pictographs- Independent Practice Worksheet

Complete all the problems. Make sure to draw pictures to help you solve the problems.

1. Kitty's sells pens at her shop. She tracked her sales so far this year. She sold the following number of pens over the last 4 months:

January – 20 February – 15 March – 40 April - 50

Create a pictogram chart to display the data.

2. Create a pictograph: Arrange the pictures given below to create a pictograph. Use words "more" and "less" to compare.



There are _____ nail paints than dryers.

There are _____ lipsticks than nail paints.

3. Nora went for long walks and drank water. She tracked the amount that she drank over the last 4 hours:

1st hr. – 3 ltr. 2nd hr. – 3 ltr. 3rd hr. – 4ltr. 4th hr. – 5 ltr.


Create a pictogram chart to display the data.



Name _____

Date _____

4. Create a pictograph: Arrange the pictures given below to create a pictograph. Use words "more" and "less" to compare.



There are _____ Cookies than Burgers.

There are _____ Cakes than Cookies.

5. Jessica has a girl's costume store. She tracked the sales of her top selling dress over the last 4 months:

June=20 July=25 August=10 September=40

Create a pictogram chart to display the data.

6. Create a pictograph: Arrange the pictures given below to create a pictograph. Use words "more" and "less" to compare.



There are _____ ducks then birds.

There are _____ parrot than ducks.

7. There is a list of students who participates in different games in a school competition.

Skating=15 Badminton=30 Tennis=10

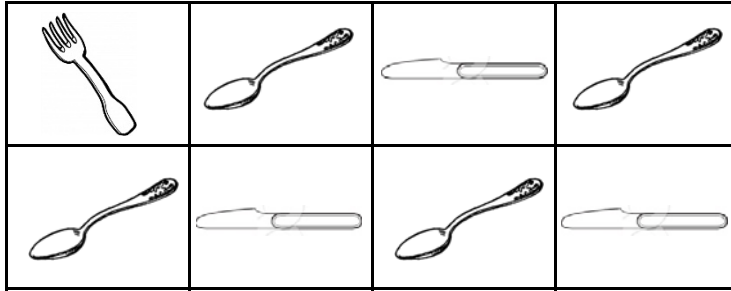
Create a pictogram chart to display the data.



Name _____

Date _____

8. Create a pictograph: Arrange the pictures given below to create a pictograph. Use words "more" and "less" to compare.



Forks are _____ than knife.


There are _____ spoons than fork.

9. Joy's eat Banana at his hostel. Warden tracked his eating report so far this month. He eats the following number of Banana this month:

1st Week – 7 2nd Week – 3 3rd Week – 4 4th Week – 5

Create a pictogram chart to display the data.

10. Create a pictograph: Arrange the pictures given below to create a pictograph. Use words "more" and "less" to compare.



There are _____ chef hats then caps.

There are _____ hats than chef hats.

