

Name _____



Date _____

Making Pictographs- Guided Lesson Explanation**Explanation#1**

A simple way to do this is first to list countries.

Then create two separate rows for boys and girls.

All we would need to do is to drop the data into that chart.

Survey 2010				
	1564	987	564	3154
	2012	896	845	2568
	India	Australia	America	China



Name _____

Date _____

Explanation#2

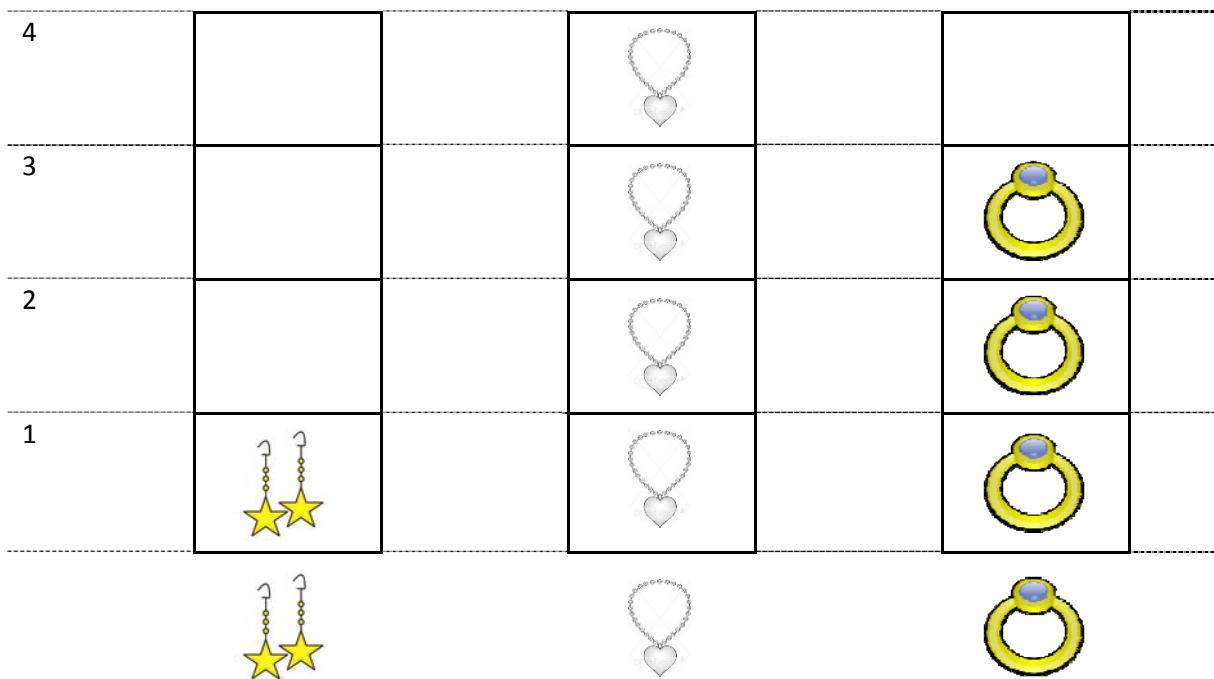
Step 1) We have three types of jewelry (necklaces, rings, and earrings). We will need to create a separate column for each type of jewelry.

Step 2) Time to determine how much of each piece of jewelry we have.

Necklaces = 4 Rings = 3 Earrings = 1

We will need to have space for a maximum of 4 pieces of jewelry, since we have four necklaces.

Step 3) Plot out our chart.



Answer our attached questions:

There are more necklaces than ring.

There are less earrings than rings.



Name _____

Date _____

Explanation#3

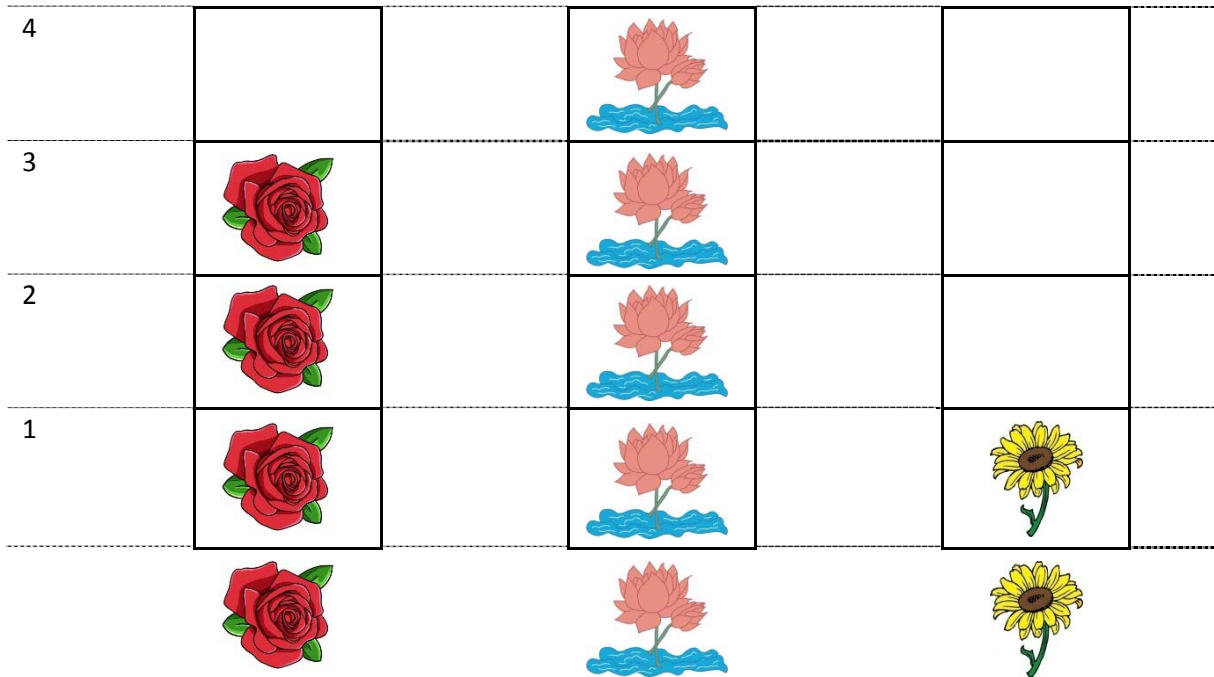
Step 1) Create a column for each type of flower. We have 3.

Step 2) Count the number of each flower type:

Roses = 3

Lotus = 4

Sunflowers = 1



There are more Roses than Sunflowers.

There are more Lotuses than Roses.

