

Name _____

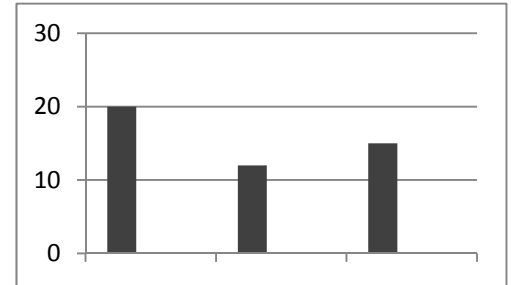
Date _____

Making Bar Graphs - Matching Worksheet

Match the word problems to the matching graph.

1. 37 students voted on their favorite fruit. Mangoes were the most popular choice. The results of voting can be seen below. Create a bar graph using the space below.

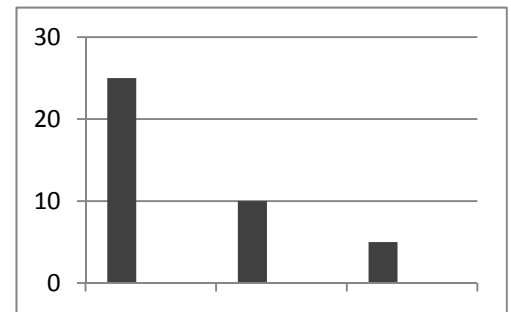
a



10 – Banana 12 – Pineapple
15 – Mango

2. 47 students voted on their favorite Game. Soccer was the most popular choice. The results of voting can be seen below. Create a bar graph using the space below.

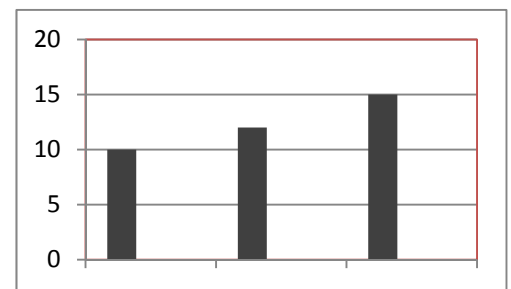
b



20 – Soccer 12 – Football
15 – Basketball

3. 40 students voted on their favorite type of candy. Vanilla candies were the most popular choice. The results of voting can be seen below. Create a bar graph using the space below.

c



25 – Vanilla 10 – Strawberry
5 – Butterscotch

