

Name _____

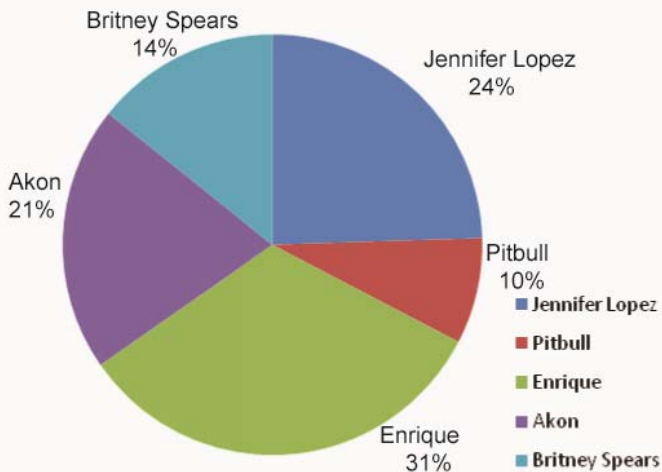
Date _____

Reading Circle Graphs- Worksheet 1

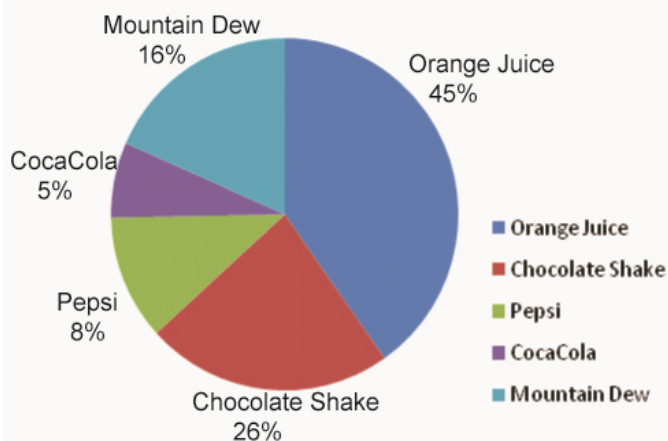
Use the graph to answer the following:

1. About what percent of singer popularity did Enrique receive?
A. 24% B. 13% C. 31% D. 6%
2. How many people voted for Akon?
A. 21% B. 31% C. 23% D. 21%
3. How far in front of Pitbull is Enrique?
A. 14% B. 21% C. 11% D. 6%
4. What percentage voted for Britney Spears as their favorite singer?
A. 29% B. 31% C. 17% D. 14%
5. How many people voted for Jennifer Lopez?
A. 31% B. 24% C. 14% D. 6%
6. About what percent of drink represents Pepsi?
A. 45% B. 7% C. 36% D. 8%
7. What percentage of people chose Chocolate Shake?
A. 26% B. 16% C. 14% D. 15%
8. What percentage of people chose Mountain Dew?
A. 45% B. 14% C. 16% D. 26%
9. What percentage of people chose Orange Juice?
A. 34% B. 45% C. 25% D. 5%
10. Which is the most popular Drink?
A. Orange Juice B. Pepsi C. Coca cola D. Mountain Dew

Singers



Favourite Drink



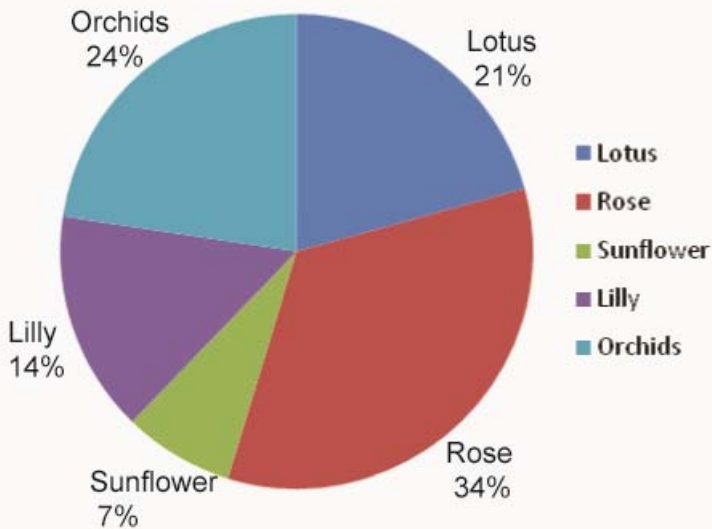
Name _____

Date _____

Topic : Reading Circle Graphs- Worksheet 2

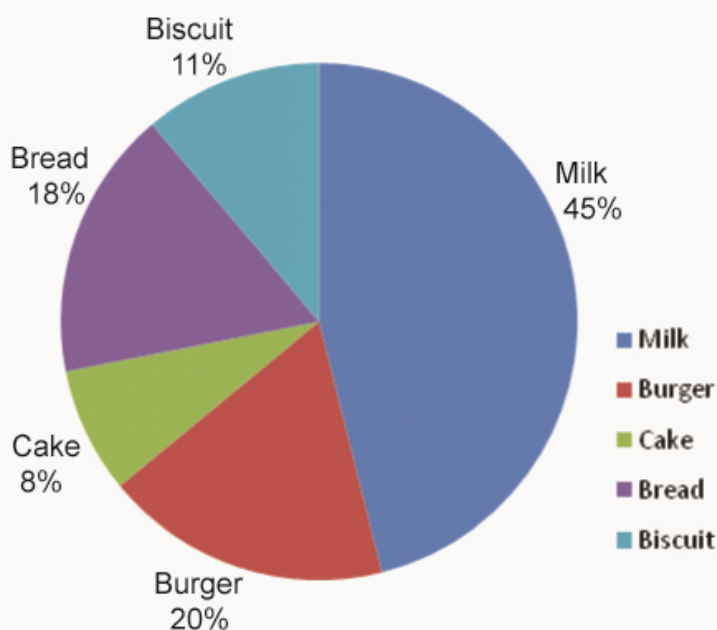
Use the graph to answer the following:

Flowers



1. About what percent of Flowers represents Rose?
A. 24% B. 34% C. 31% D. 6%
2. What percentage of people chose Lotus?
A. 7% B. 31% C. 23% D. 21%
3. About what percent of flowers represents Orchids?
A. 24% B. 21% C. 11% D. 6%
4. What percentage of people chose Lilly as their favorite Flower?
A. 29% B. 31% C. 17% D. 14%
5. What percentage of people chose Sun flower?
A. 31% B. 7% C. 14% D. 6%

Favourite Food



6. What percentage of people chose Burger?
A. 45% B. 7% C. 20% D. 8%
7. What percentage of people chose Biscuit?
A. 11% B. 16% C. 14% D. 15%
8. What percentage of people chose Bread?
A. 45% B. 14% C. 18% D. 26%
9. What percentage of people chose Cake?
A. 34% B. 45% C. 25% D. 8%
10. Which is the most popular Food?
A. Bread B. Milk C. Burger D. Cake



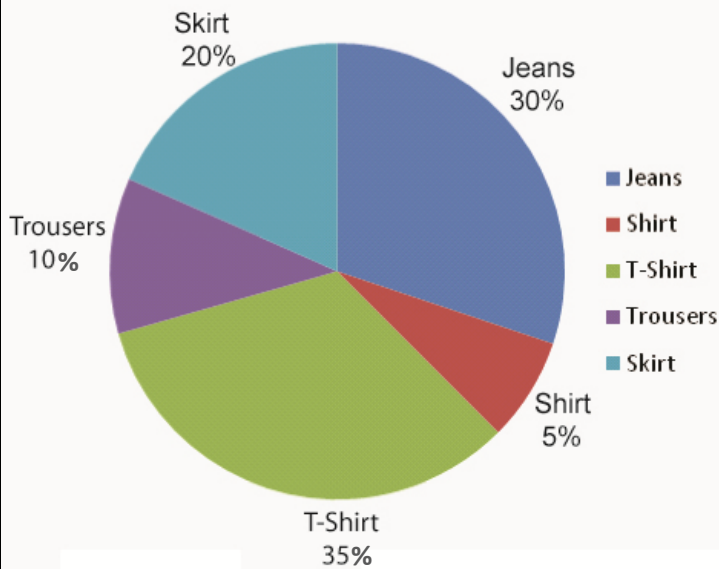
Name _____

Date _____

Topic : Reading Circle Graphs- Worksheet 3

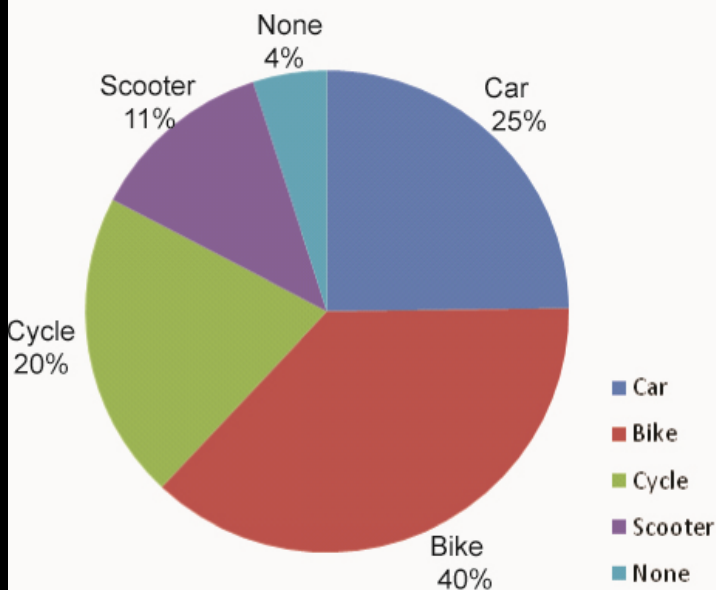
Use the graph to answer the following:

Garments



1. About what percent of Garments represents Shirt?
A. 24% B. 35% C. 31% D. 5%
2. About what percent of Garments represents Trousers?
A. 10% B. 31% C. 23% D. 30%
3. About what percent of Garments represents Skirt?
A. 24% B. 20% C. 35% D. 6%
4. About what percent of Garments represents Jeans?
A. 30% B. 50% C. 16% D. 14%
5. About what percent of Garments represents T-Shirts?
A. 35% B. 7% C. 14% D. 6%

Favorite Vehicle



6. What percentage of people chose Car?
A. 45% B. 25% C. 20% D. 4%
7. What percentage of people chose Scooter?
A. 11% B. 16% C. 14% D. 15%
8. What percentage of people chose Cycle?
A. 45% B. 14% C. 18% D. 20%
9. What percentage of people chose none?
A. 25% B. 4% C. 25% D. 20%
10. Which is the most popular vehicle?
A. Bike B. Car C. Scooter D. Cycle



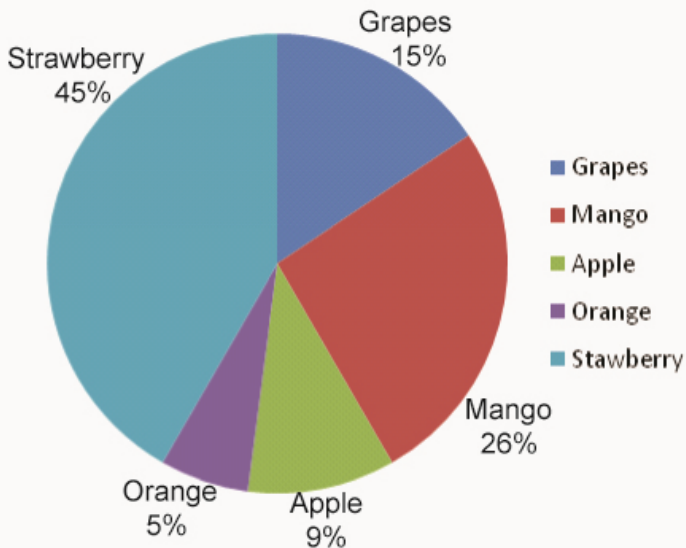
Name _____

Date _____

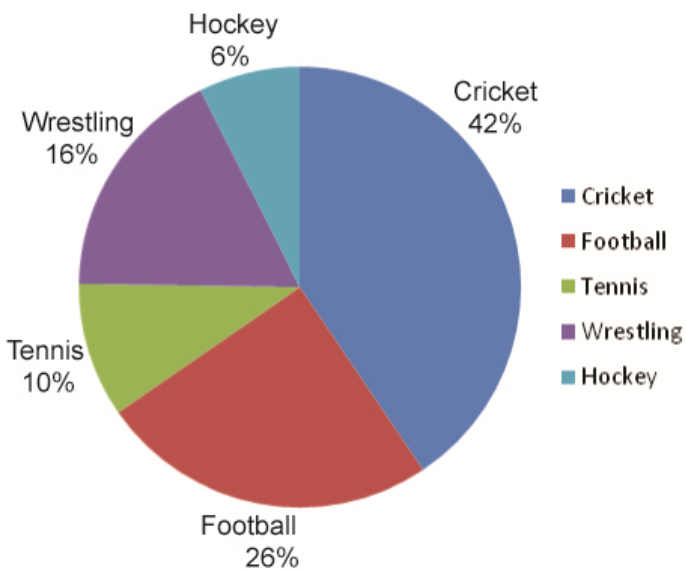
Topic : Reading Circle Graphs- Worksheet 4

Use the graph to answer the following:

Favourite fruit



Favourite Sport



1. What percentage of people chose Grapes?
A. 24% B. 35% C. 15% D. 5%
2. What percentage of people chose Apples?
A. 9% B. 31% C. 23% D. 30%
3. What percentage of people chose Mango?
A. 45% B. 20% C. 26% D. 9%
4. What percentage of people chose Strawberry as their favorite fruit?
A. 30% B. 45% C. 16% D. 14%
5. What percentage of people chose Orange?
A. 35% B. 7% C. 14% D. 5%
6. What percentage of people chose Football?
A. 10% B. 26% C. 6% D. 4%
7. What percentage of people chose Hockey?
A. 16% B. 10% C. 6% D. 15%
8. What percentage of people chose Tennis?
A. 10% B. 14% C. 18% D. 20%
9. What percentage of people chose Wrestling?
A. 25% B. 4% C. 25% D. 16%
10. Which is the most popular sport?
A. Cricket B. Football C. Tennis D. Hockey

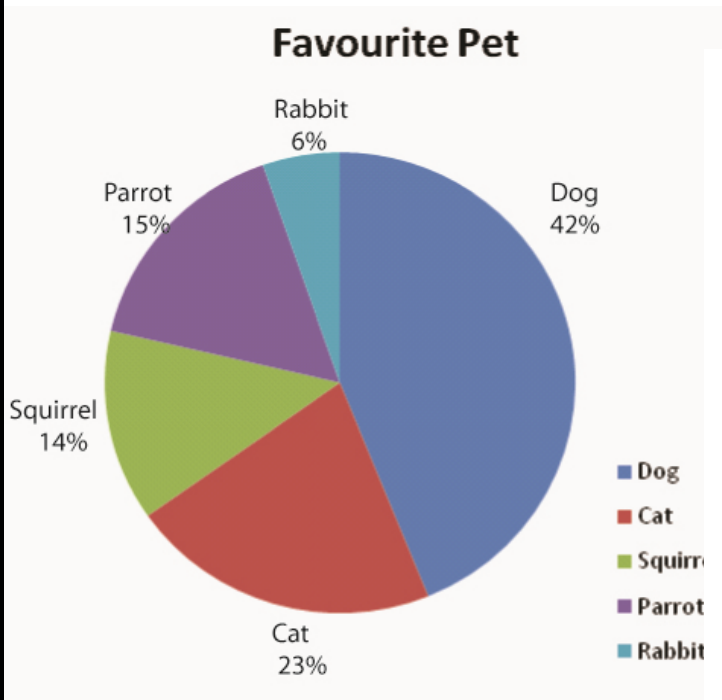


Name _____


Date _____

Topic : Reading Circle Graphs- Worksheet 5

Use the graph to answer the following:



1. About what percentage of people chose Rabbits?
A. 6% B. 35% C. 15% D. 23%
2. About what percentage of people chose Squirrels?
A. 9% B. 31% C. 14% D. 30%
3. About what percentage of people chose Parrots?
A. 45% B. 15% C. 26% D. 9%
4. About what percentage of people chose Dog ?
A. 23% B. 45% C. 16% D. 42%
5. About what percentage of people chose Cat?
A. 23% B. 7% C. 14% D. 15%



6. About what percent of Cell Phones are Blackberries?
A. 10% B. 26% C. 6% D. 9%
7. About what percent of Cell Phones are Samsung?
A. 16% B. 10% C. 6% D. 15%
8. About what percent of Cell Phones are Sony Ericson?
A. 10% B. 14% C. 18% D. 9%
9. About what percent of Cell Phones are Apple Iphones?
A. 19% B. 9% C. 26% D. 36%
10. Which is the most popular Cell Phone brand?
A. Blackberry B. Sony Ericson C. Samsung D. Nokia

